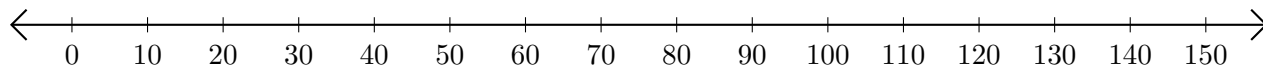


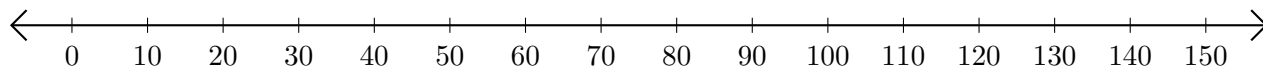
## Subtracting on Number Lines (F)

Use the number lines to calculate each difference.

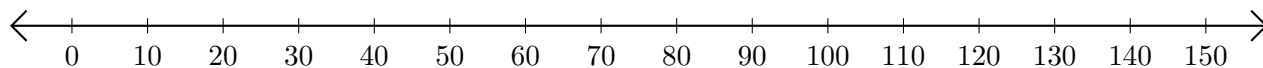
1.  $150 - 80 = \underline{\quad}$



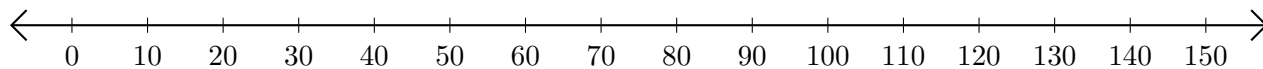
2.  $140 - 50 = \underline{\quad}$



3.  $110 - 70 = \underline{\quad}$



4.  $120 - 110 = \underline{\quad}$



5.  $150 - 120 = \underline{\quad}$

