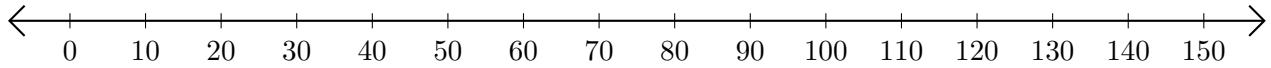


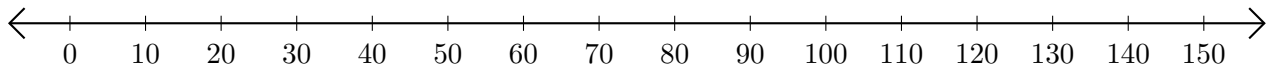
Subtracting on Number Lines (H)

Use the number lines to calculate each difference.

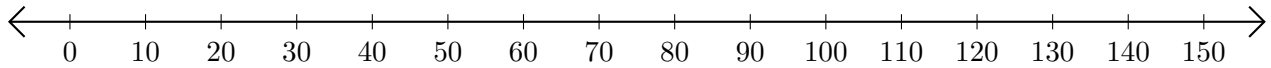
1. $130 - 50 = \underline{\quad}$



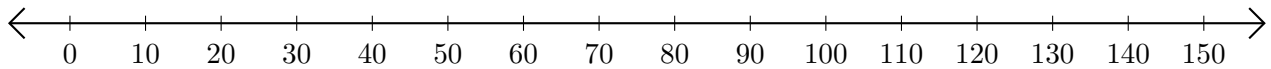
2. $150 - 100 = \underline{\quad}$



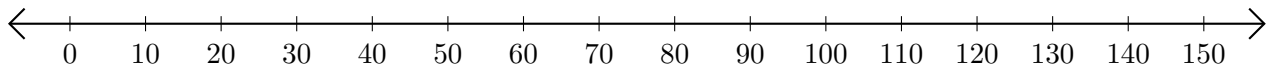
3. $130 - 30 = \underline{\quad}$



4. $80 - 70 = \underline{\quad}$



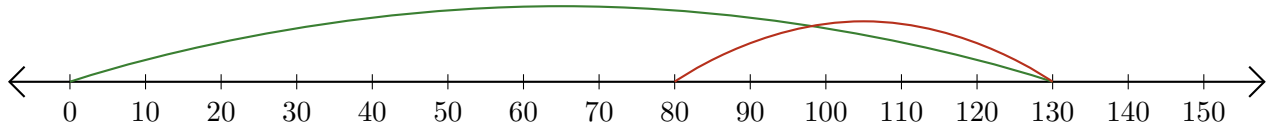
5. $150 - 120 = \underline{\quad}$



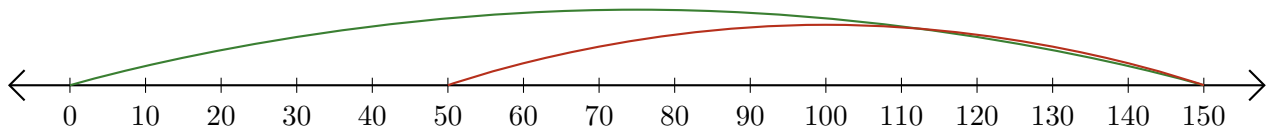
Subtracting on Number Lines (H) Answers

Use the number lines to calculate each difference.

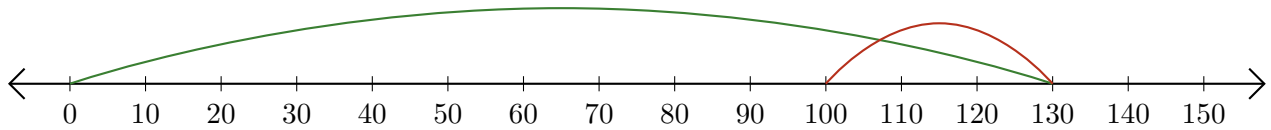
1. $130 - 50 = \underline{80}$



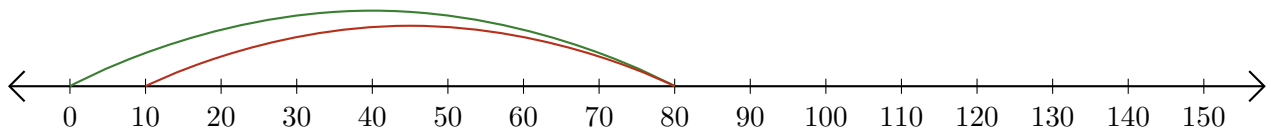
2. $150 - 100 = \underline{50}$



3. $130 - 30 = \underline{100}$



4. $80 - 70 = \underline{10}$



5. $150 - 120 = \underline{30}$

