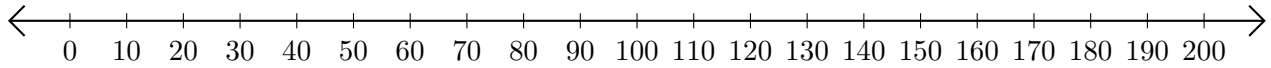


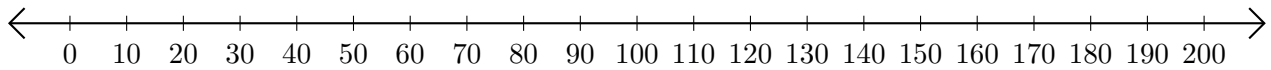
Subtracting on Number Lines (B)

Use the number lines to calculate each difference.

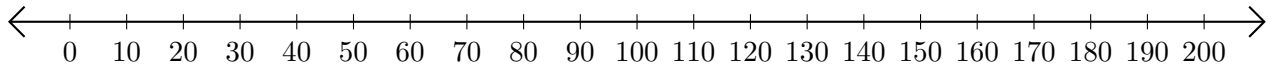
1. $190 - 50 = \underline{\hspace{2cm}}$



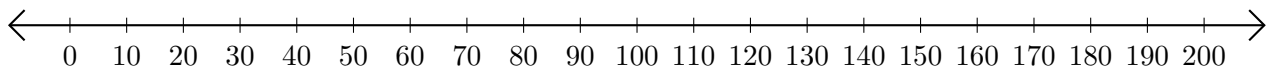
2. $170 - 10 = \underline{\hspace{2cm}}$



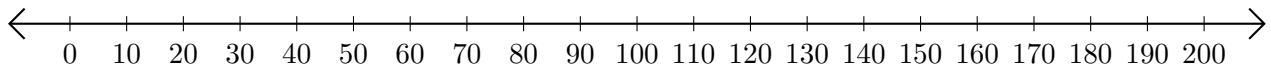
3. $200 - 140 = \underline{\hspace{2cm}}$



4. $130 - 30 = \underline{\hspace{2cm}}$



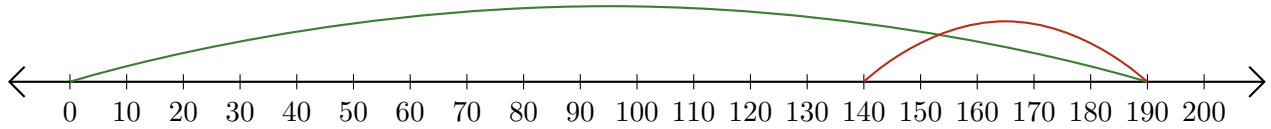
5. $200 - 180 = \underline{\hspace{2cm}}$



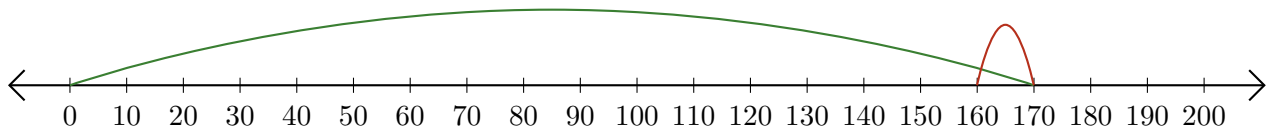
Subtracting on Number Lines (B) Answers

Use the number lines to calculate each difference.

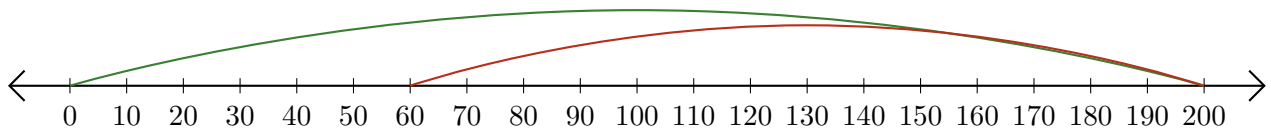
1. $190 - 50 = \underline{140}$



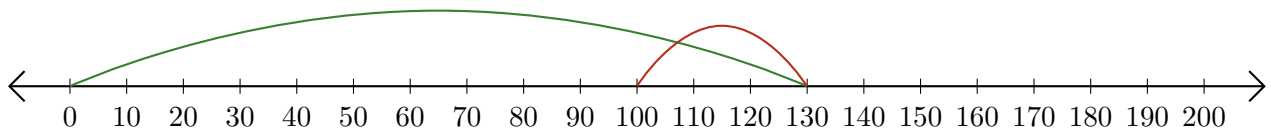
2. $170 - 10 = \underline{160}$



3. $200 - 140 = \underline{60}$



4. $130 - 30 = \underline{100}$



5. $200 - 180 = \underline{20}$

