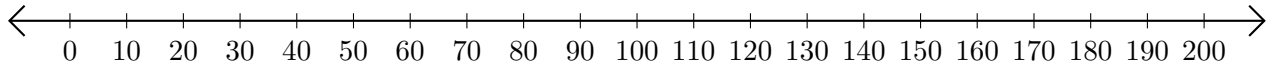


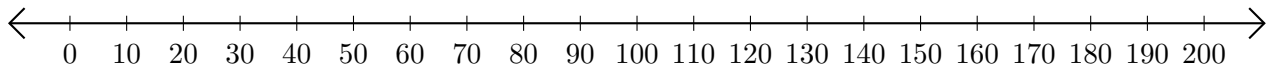
## Subtracting on Number Lines (B)

Use the number lines to calculate each difference.

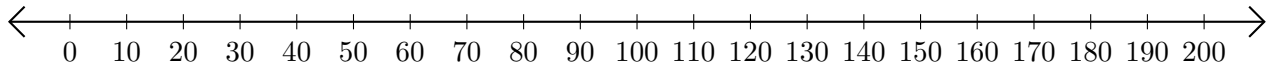
1.  $190 - 50 = \underline{\quad}$



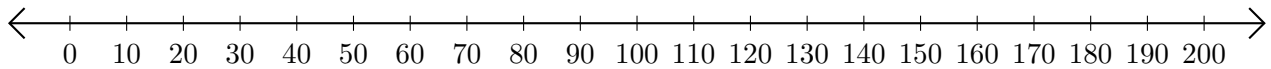
2.  $170 - 10 = \underline{\quad}$



3.  $200 - 140 = \underline{\quad}$



4.  $130 - 30 = \underline{\quad}$



5.  $200 - 180 = \underline{\quad}$

