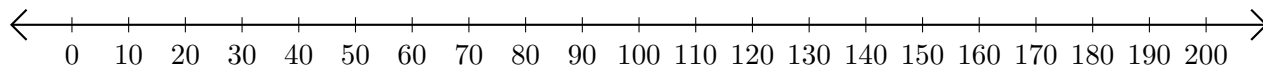


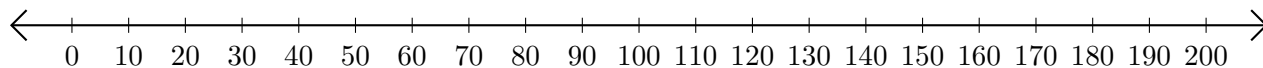
Subtracting on Number Lines (C)

Use the number lines to calculate each difference.

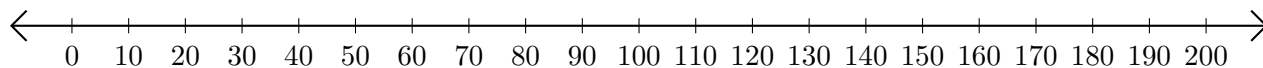
1. $190 - 140 = \underline{\quad}$



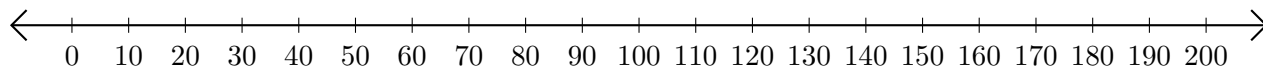
2. $180 - 160 = \underline{\quad}$



3. $190 - 180 = \underline{\quad}$



4. $140 - 50 = \underline{\quad}$



5. $200 - 170 = \underline{\quad}$

