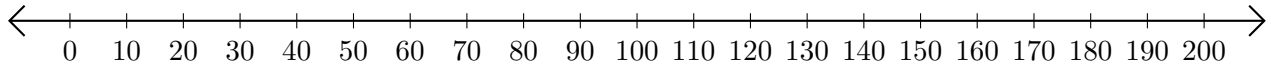


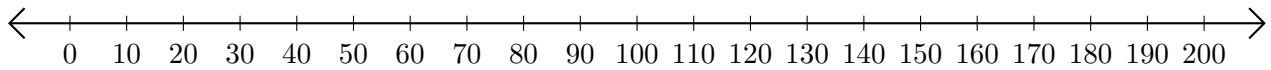
Subtracting on Number Lines (D)

Use the number lines to calculate each difference.

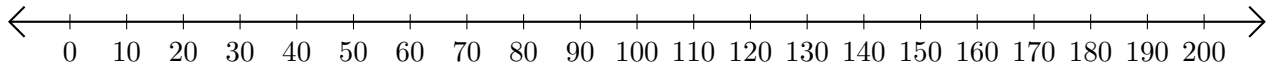
1. $170 - 120 = \underline{\quad}$



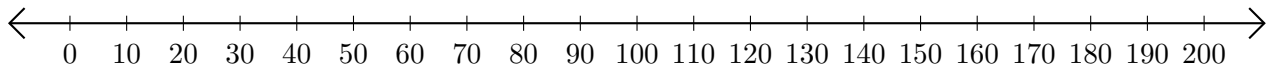
2. $200 - 180 = \underline{\quad}$



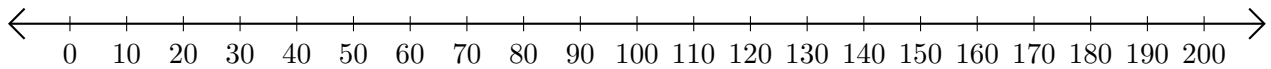
3. $100 - 80 = \underline{\quad}$



4. $30 - 20 = \underline{\quad}$



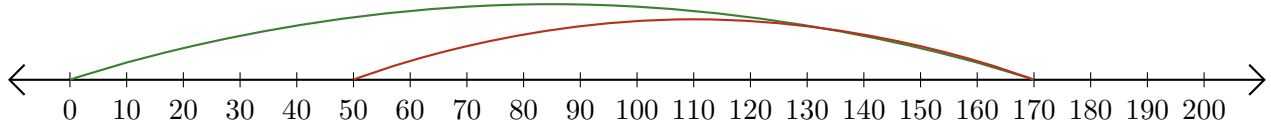
5. $190 - 160 = \underline{\quad}$



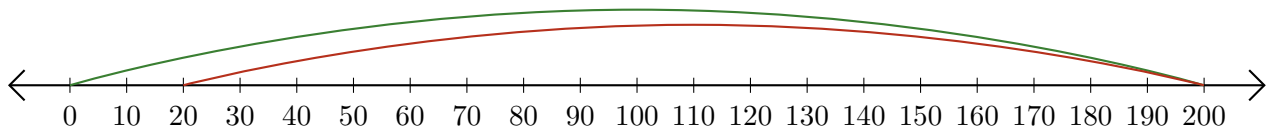
Subtracting on Number Lines (D) Answers

Use the number lines to calculate each difference.

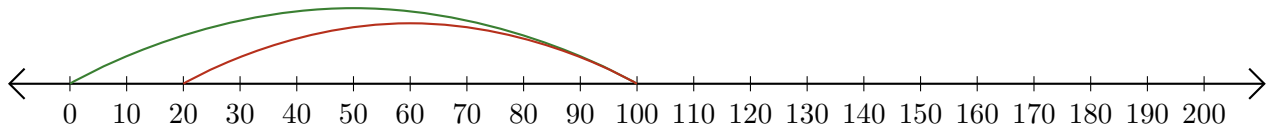
1. $170 - 120 = \underline{50}$



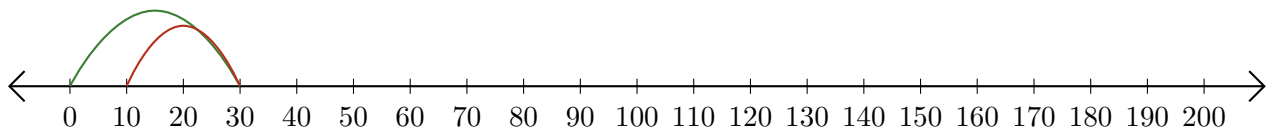
2. $200 - 180 = \underline{20}$



3. $100 - 80 = \underline{20}$



4. $30 - 20 = \underline{10}$



5. $190 - 160 = \underline{30}$

