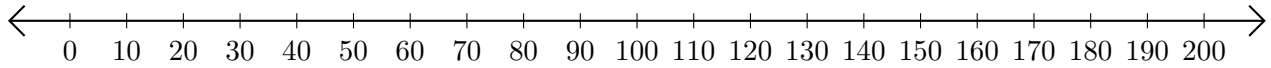


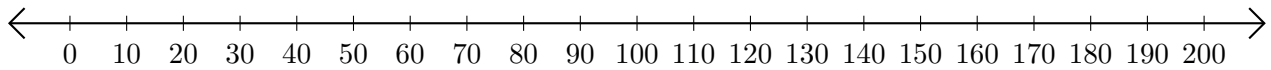
## Subtracting on Number Lines (E)

Use the number lines to calculate each difference.

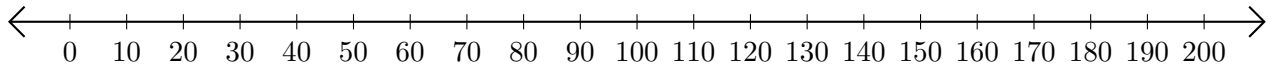
1.  $200 - 190 = \underline{\quad}$



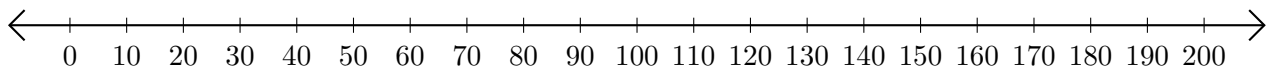
2.  $190 - 50 = \underline{\quad}$



3.  $170 - 60 = \underline{\quad}$



4.  $200 - 90 = \underline{\quad}$



5.  $150 - 100 = \underline{\quad}$

