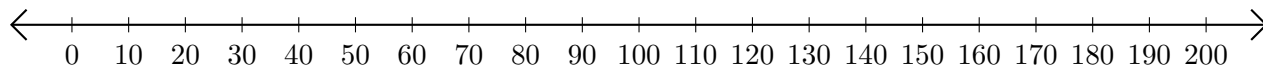


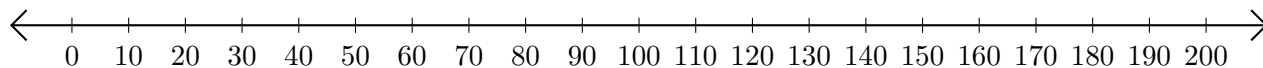
## Subtracting on Number Lines (F)

Use the number lines to calculate each difference.

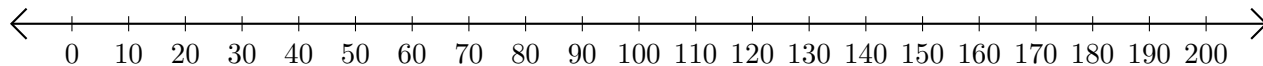
1.  $70 - 60 = \underline{\quad}$



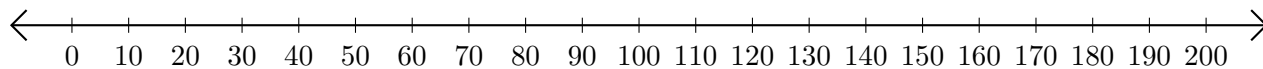
2.  $160 - 110 = \underline{\quad}$



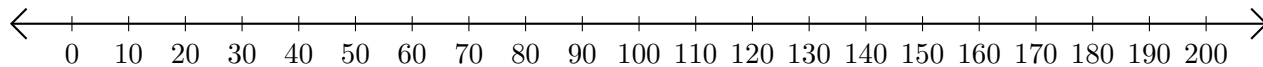
3.  $150 - 140 = \underline{\quad}$



4.  $110 - 100 = \underline{\quad}$



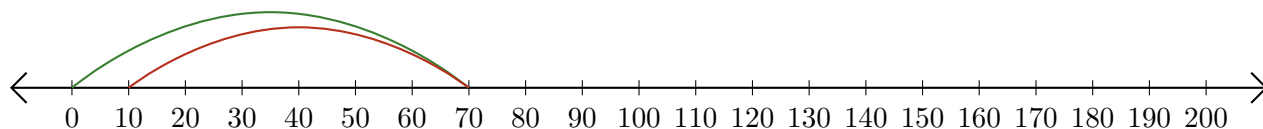
5.  $110 - 40 = \underline{\quad}$



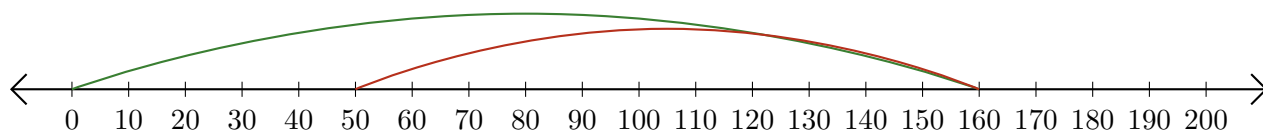
# Subtracting on Number Lines (F) Answers

Use the number lines to calculate each difference.

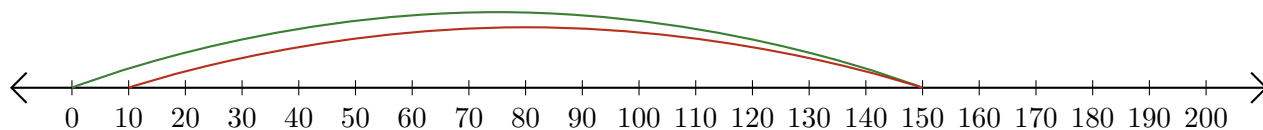
1.  $70 - 60 = \underline{10}$



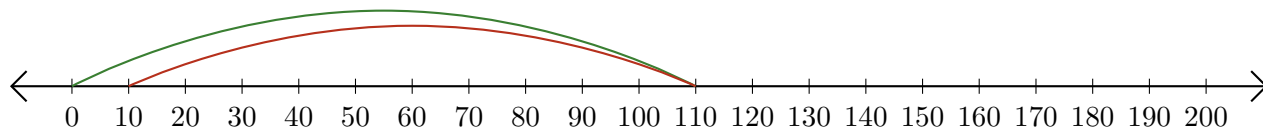
2.  $160 - 110 = \underline{50}$



3.  $150 - 140 = \underline{10}$



4.  $110 - 100 = \underline{10}$



5.  $110 - 40 = \underline{70}$

