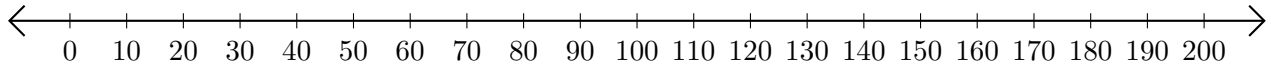


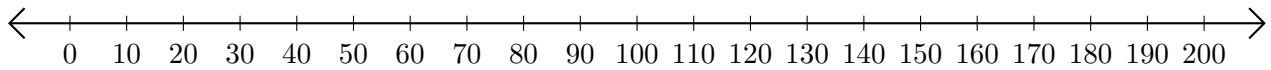
Subtracting on Number Lines (F)

Use the number lines to calculate each difference.

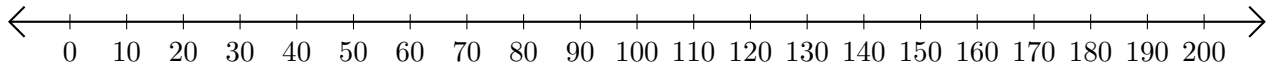
1. $70 - 60 = \underline{\quad}$



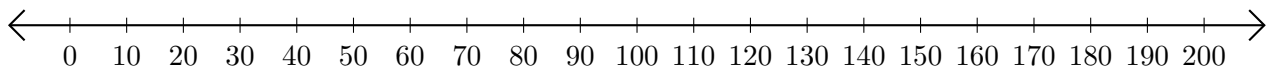
2. $160 - 110 = \underline{\quad}$



3. $150 - 140 = \underline{\quad}$



4. $110 - 100 = \underline{\quad}$



5. $110 - 40 = \underline{\quad}$

