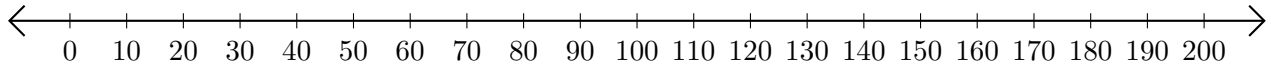


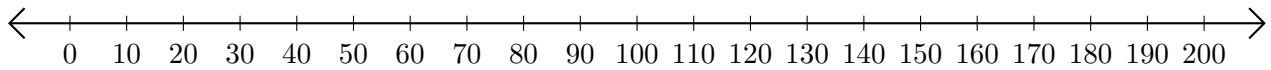
Subtracting on Number Lines (I)

Use the number lines to calculate each difference.

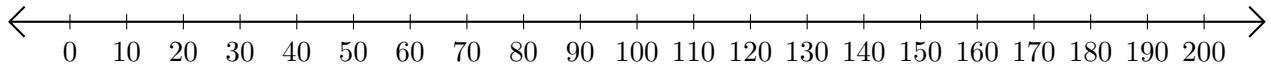
1. $130 - 70 = \underline{\quad}$



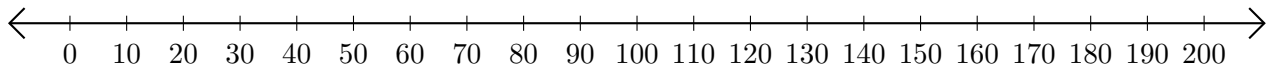
2. $80 - 20 = \underline{\quad}$



3. $200 - 190 = \underline{\quad}$



4. $190 - 160 = \underline{\quad}$



5. $190 - 170 = \underline{\quad}$

