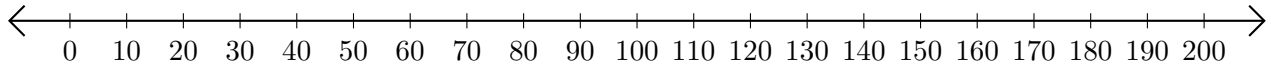


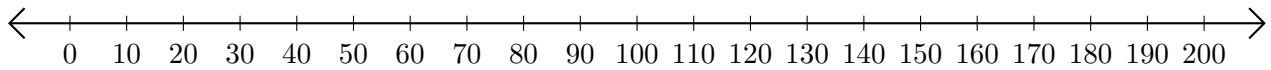
# Subtracting on Number Lines (J)

Use the number lines to calculate each difference.

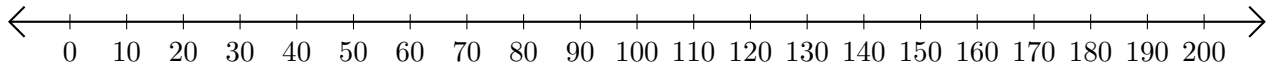
1.  $140 - 100 = \underline{\quad}$



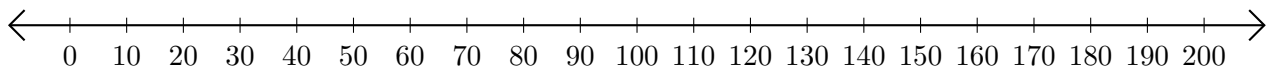
2.  $190 - 180 = \underline{\quad}$



3.  $110 - 40 = \underline{\quad}$



4.  $190 - 80 = \underline{\quad}$



5.  $170 - 70 = \underline{\quad}$

