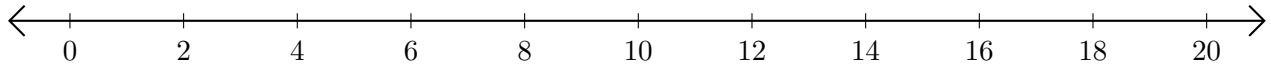


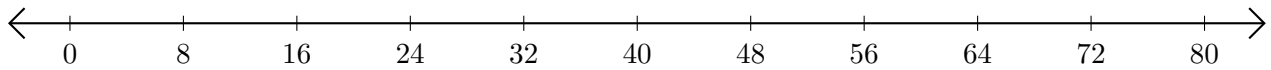
Subtracting on Number Lines (A)

Use the number lines to calculate each difference.

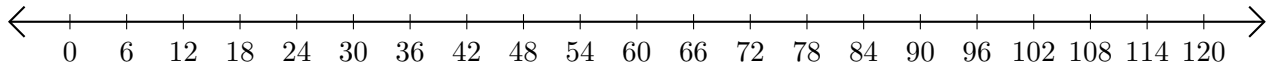
1. $12 - 8 = \underline{\quad}$



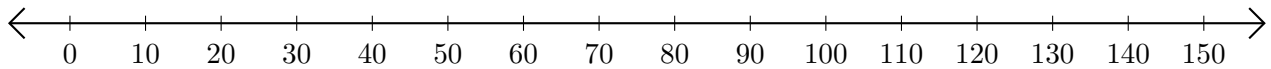
2. $56 - 16 = \underline{\quad}$



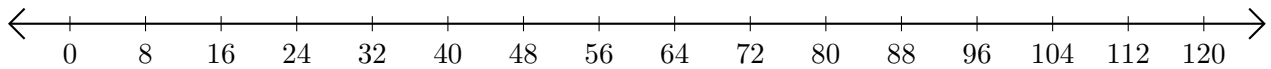
3. $30 - 24 = \underline{\quad}$



4. $110 - 20 = \underline{\quad}$



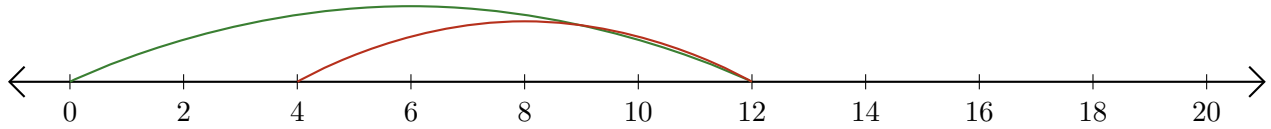
5. $88 - 72 = \underline{\quad}$



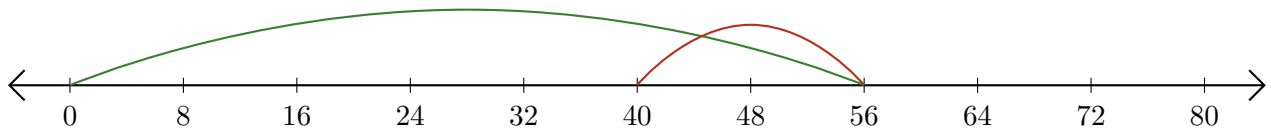
Subtracting on Number Lines (A) Answers

Use the number lines to calculate each difference.

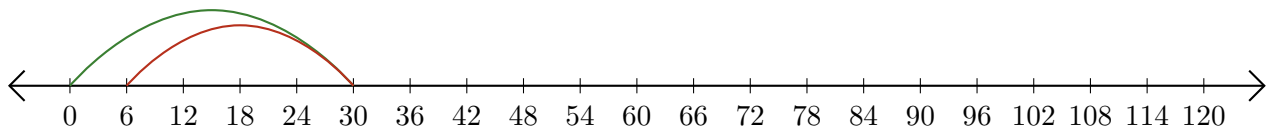
1. $12 - 8 = \underline{4}$



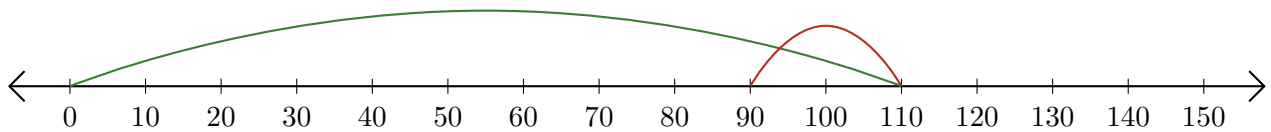
2. $56 - 16 = \underline{40}$



3. $30 - 24 = \underline{6}$



4. $110 - 20 = \underline{90}$



5. $88 - 72 = \underline{16}$

