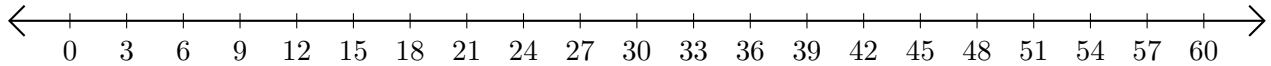


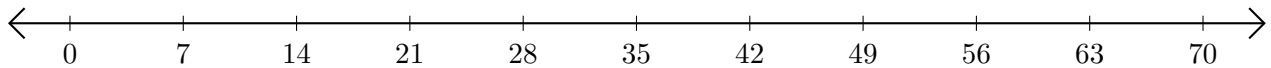
Subtracting on Number Lines (B)

Use the number lines to calculate each difference.

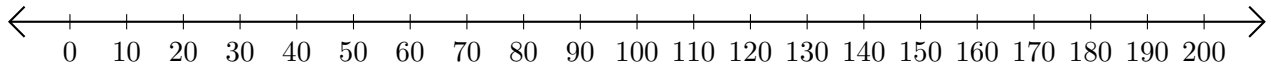
1. $60 - 54 = \underline{\quad}$



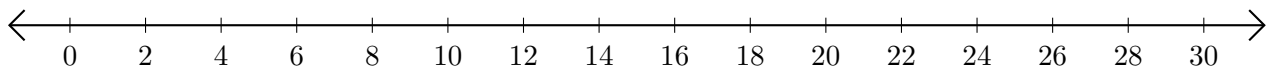
2. $42 - 28 = \underline{\quad}$



3. $120 - 110 = \underline{\quad}$



4. $26 - 10 = \underline{\quad}$



5. $84 - 49 = \underline{\quad}$

