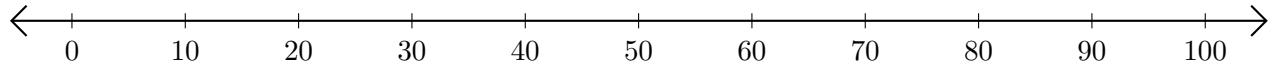


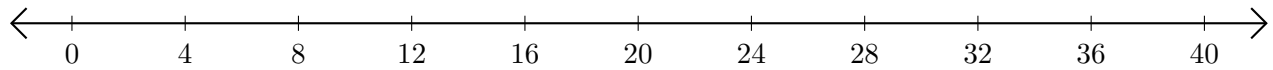
# Subtracting on Number Lines (C)

Use the number lines to calculate each difference.

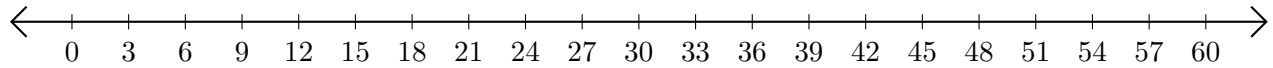
1.  $70 - 50 = \underline{\quad}$



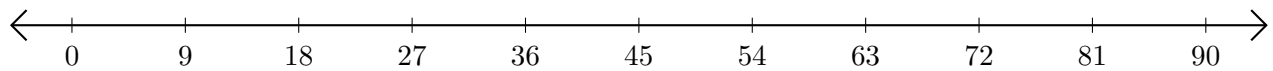
2.  $40 - 36 = \underline{\quad}$



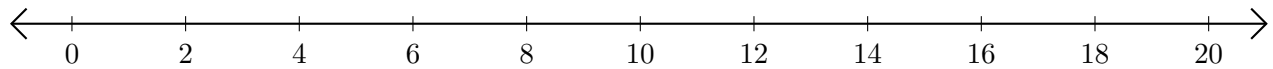
3.  $54 - 48 = \underline{\quad}$



4.  $54 - 36 = \underline{\quad}$



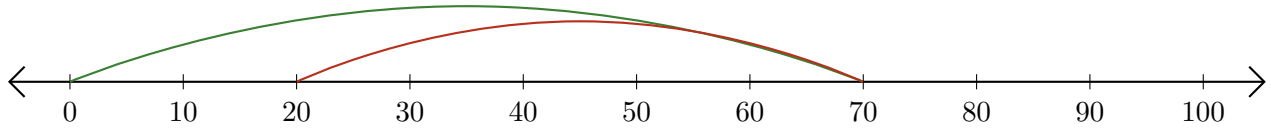
5.  $18 - 16 = \underline{\quad}$



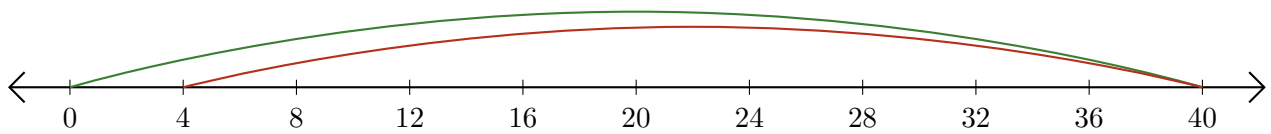
# Subtracting on Number Lines (C) Answers

Use the number lines to calculate each difference.

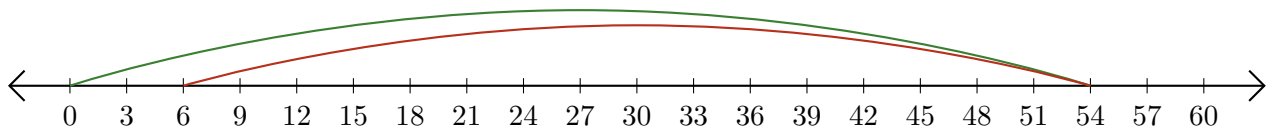
1.  $70 - 50 = \underline{20}$



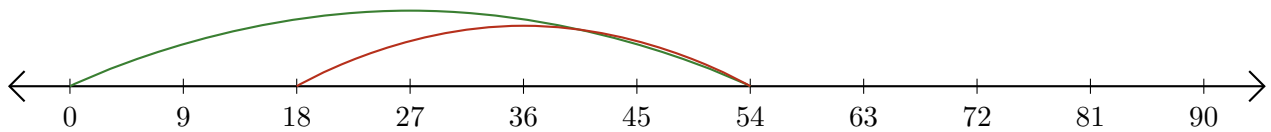
2.  $40 - 36 = \underline{4}$



3.  $54 - 48 = \underline{6}$



4.  $54 - 36 = \underline{18}$



5.  $18 - 16 = \underline{2}$

