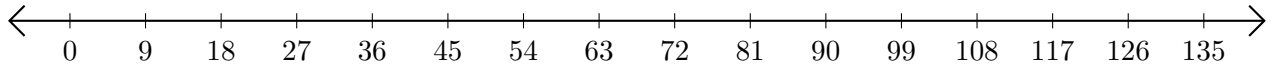


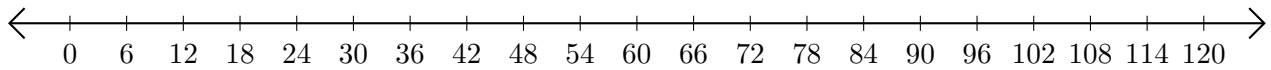
# Subtracting on Number Lines (D)

Use the number lines to calculate each difference.

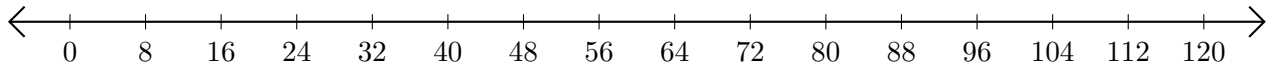
1.  $72 - 18 = \underline{\quad}$



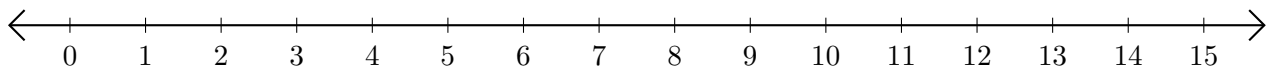
2.  $102 - 54 = \underline{\quad}$



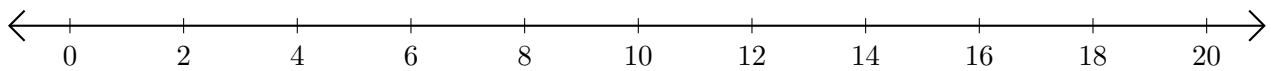
3.  $72 - 40 = \underline{\quad}$



4.  $14 - 4 = \underline{\quad}$



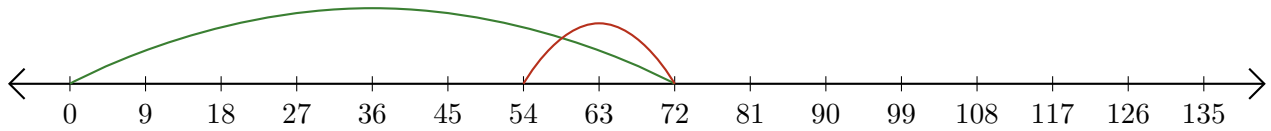
5.  $16 - 14 = \underline{\quad}$



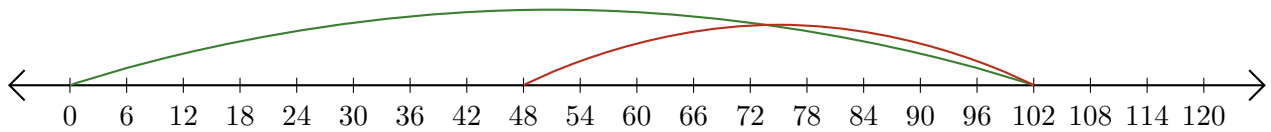
# Subtracting on Number Lines (D) Answers

Use the number lines to calculate each difference.

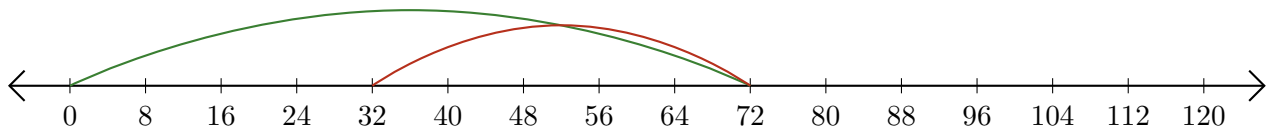
1.  $72 - 18 = \underline{54}$



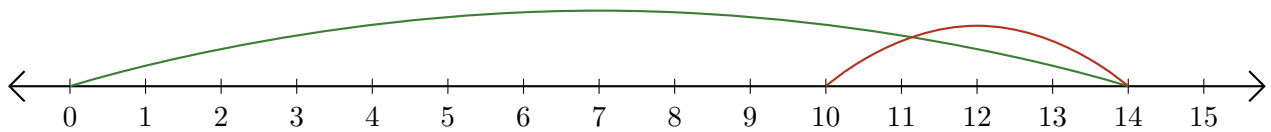
2.  $102 - 54 = \underline{48}$



3.  $72 - 40 = \underline{32}$



4.  $14 - 4 = \underline{10}$



5.  $16 - 14 = \underline{2}$

