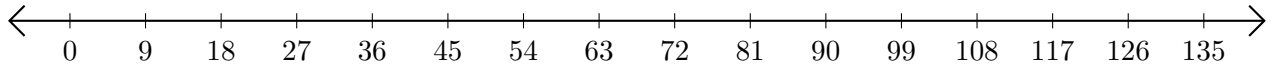


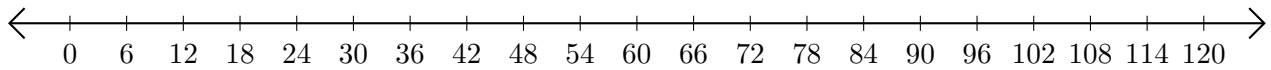
# Subtracting on Number Lines (D)

Use the number lines to calculate each difference.

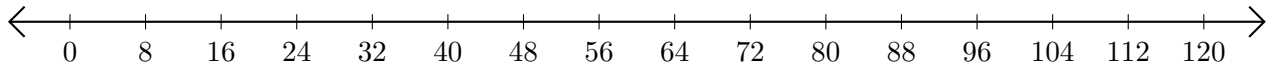
1.  $72 - 18 = \underline{\quad}$



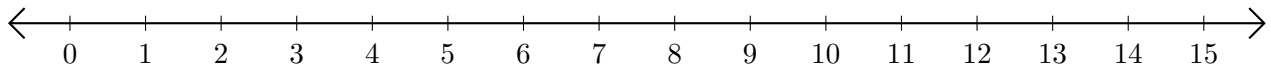
2.  $102 - 54 = \underline{\quad}$



3.  $72 - 40 = \underline{\quad}$



4.  $14 - 4 = \underline{\quad}$



5.  $16 - 14 = \underline{\quad}$

