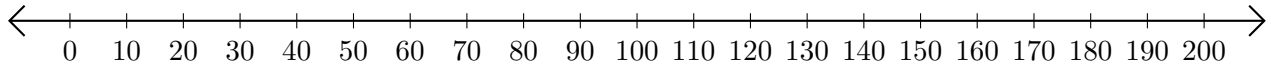


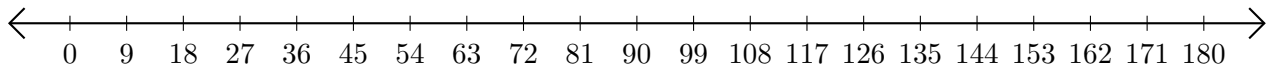
Subtracting on Number Lines (F)

Use the number lines to calculate each difference.

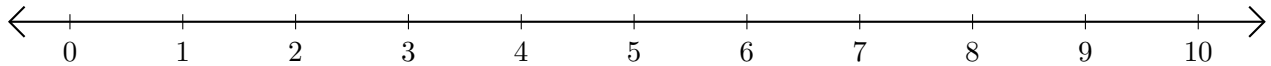
1. $130 - 100 = \underline{\quad}$



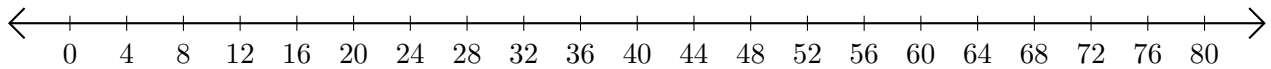
2. $144 - 81 = \underline{\quad}$



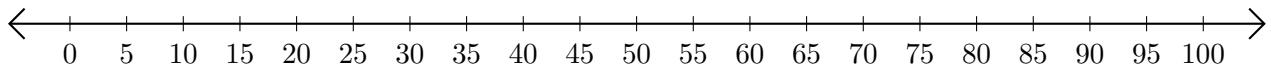
3. $9 - 5 = \underline{\quad}$



4. $52 - 8 = \underline{\quad}$



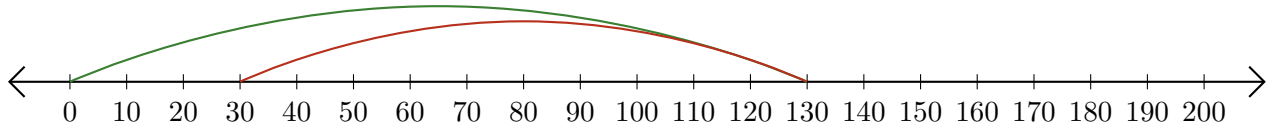
5. $70 - 25 = \underline{\quad}$



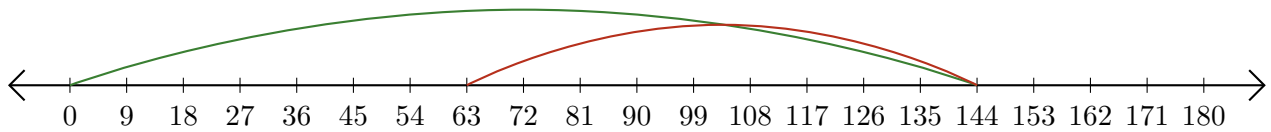
Subtracting on Number Lines (F) Answers

Use the number lines to calculate each difference.

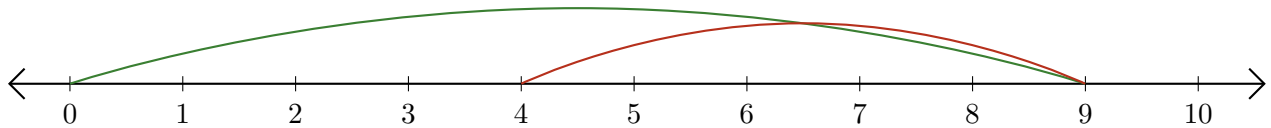
1. $130 - 100 = \underline{30}$



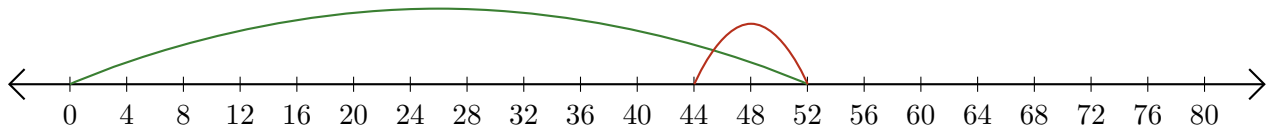
2. $144 - 81 = \underline{63}$



3. $9 - 5 = \underline{4}$



4. $52 - 8 = \underline{44}$



5. $70 - 25 = \underline{45}$

