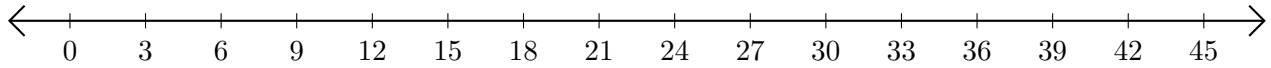


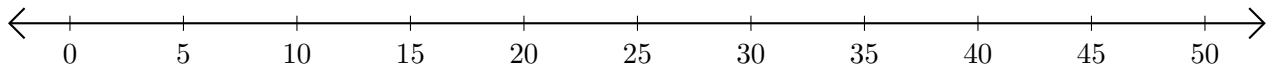
Subtracting on Number Lines (H)

Use the number lines to calculate each difference.

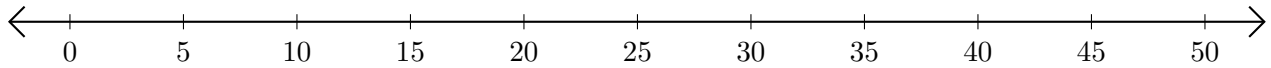
1. $45 - 30 = \underline{\quad}$



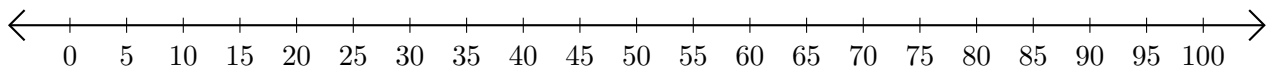
2. $50 - 40 = \underline{\quad}$



3. $50 - 5 = \underline{\quad}$



4. $100 - 85 = \underline{\quad}$



5. $160 - 110 = \underline{\quad}$

