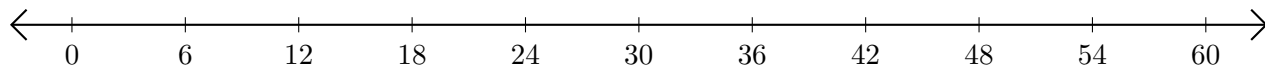


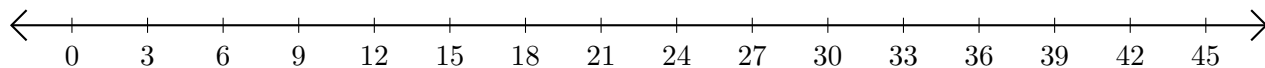
Subtracting on Number Lines (I)

Use the number lines to calculate each difference.

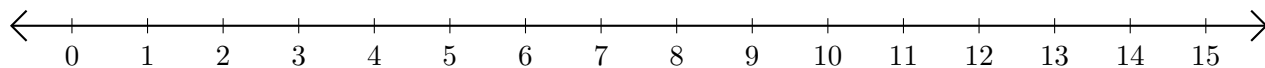
1. $60 - 54 = \underline{\quad}$



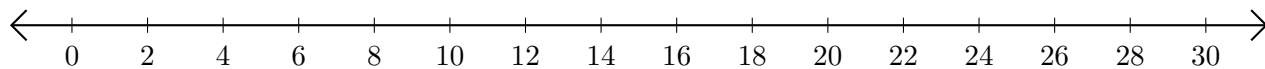
2. $42 - 27 = \underline{\quad}$



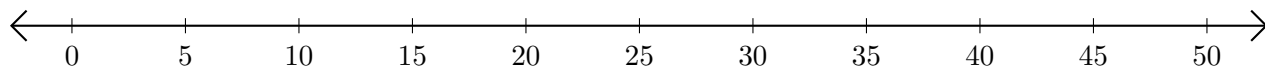
3. $11 - 8 = \underline{\quad}$



4. $30 - 28 = \underline{\quad}$



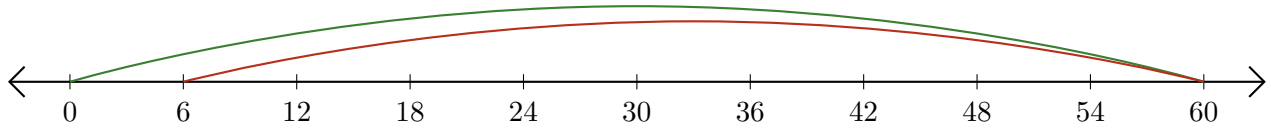
5. $20 - 15 = \underline{\quad}$



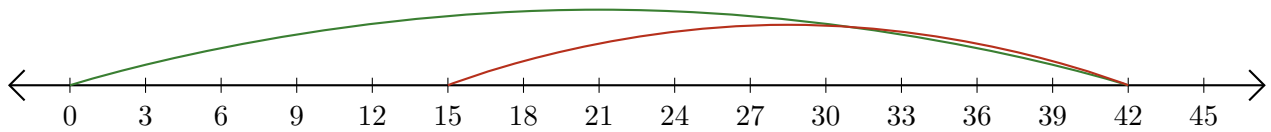
Subtracting on Number Lines (I) Answers

Use the number lines to calculate each difference.

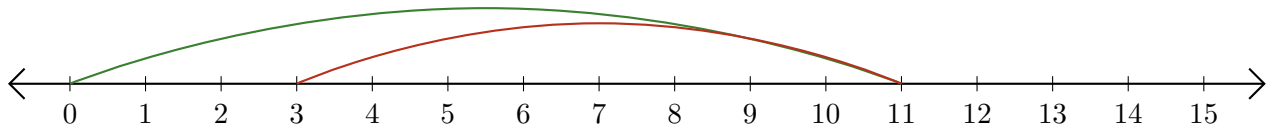
1. $60 - 54 = \underline{6}$



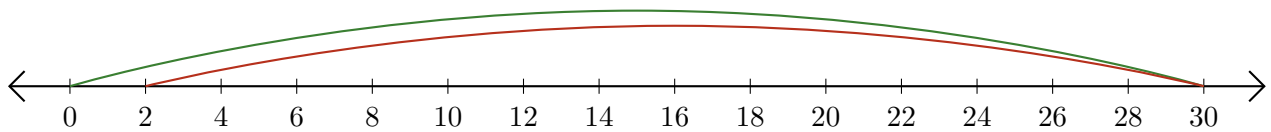
2. $42 - 27 = \underline{15}$



3. $11 - 8 = \underline{3}$



4. $30 - 28 = \underline{2}$



5. $20 - 15 = \underline{5}$

