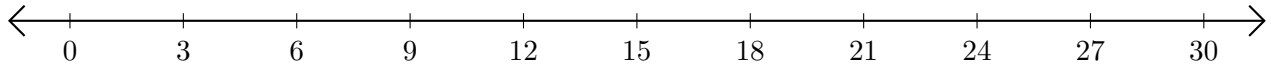


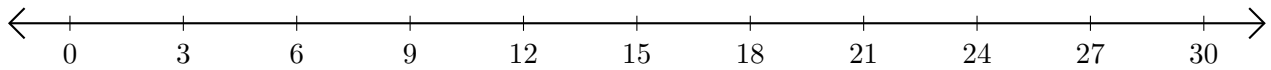
Subtracting on Number Lines (J)

Use the number lines to calculate each difference.

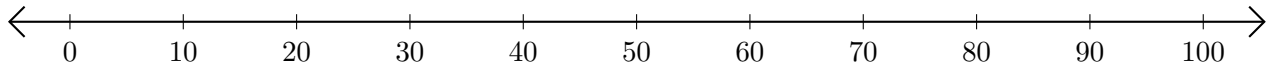
1. $30 - 15 = \underline{\quad}$



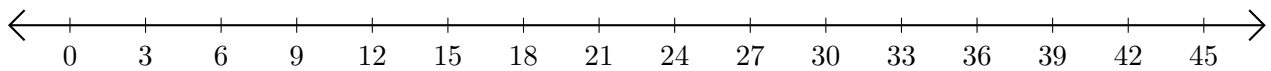
2. $12 - 6 = \underline{\quad}$



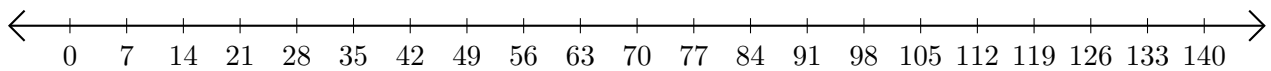
3. $70 - 60 = \underline{\quad}$



4. $30 - 18 = \underline{\quad}$



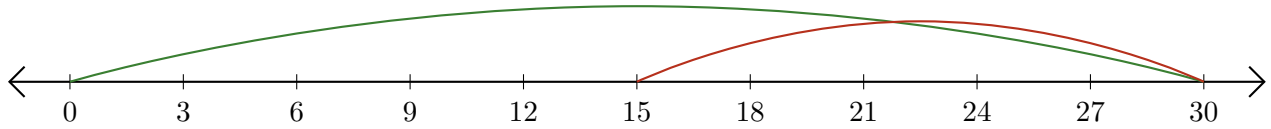
5. $112 - 91 = \underline{\quad}$



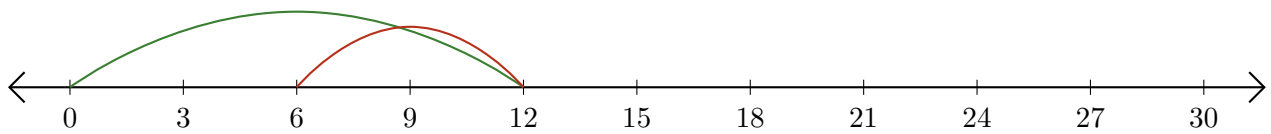
Subtracting on Number Lines (J) Answers

Use the number lines to calculate each difference.

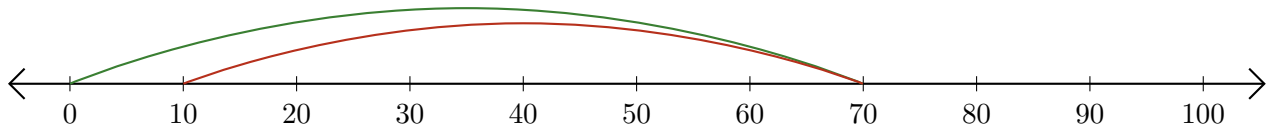
1. $30 - 15 = \underline{15}$



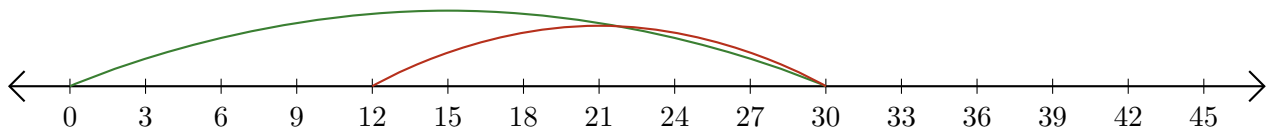
2. $12 - 6 = \underline{6}$



3. $70 - 60 = \underline{10}$



4. $30 - 18 = \underline{12}$



5. $112 - 91 = \underline{21}$

