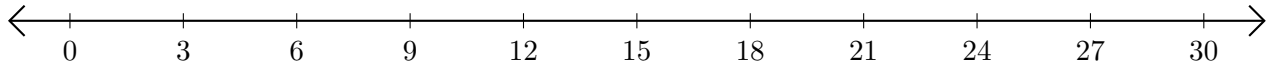


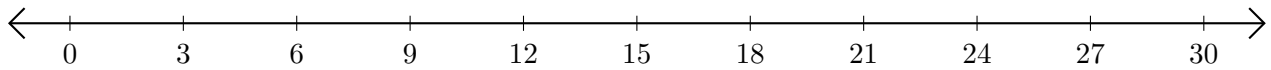
Subtracting on Number Lines (J)

Use the number lines to calculate each difference.

1. $30 - 15 = \underline{\quad}$



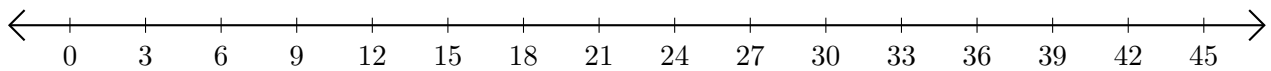
2. $12 - 6 = \underline{\quad}$



3. $70 - 60 = \underline{\quad}$



4. $30 - 18 = \underline{\quad}$



5. $112 - 91 = \underline{\quad}$

