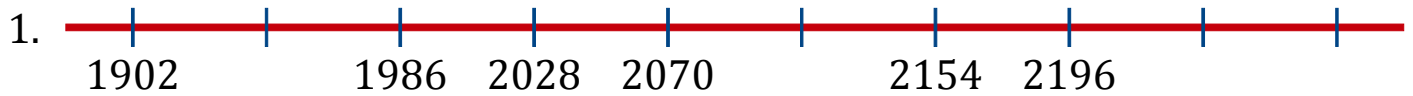


Number Line Sequences (I)

Fill in the missing numbers on each number line.



Common difference: _____



Common difference: _____




Common difference: _____



Common difference: _____




Common difference: _____



Common difference: _____



Common difference: _____



Common difference: _____