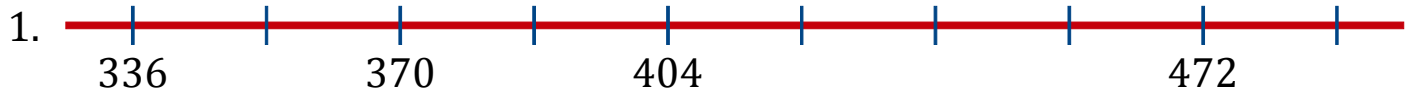



Number Line Sequences (F)

Fill in the missing numbers on each number line.



Common difference: _____



Common difference: _____



Common difference: _____




Common difference: _____



Common difference: _____



Common difference: _____



Common difference: _____



Common difference: _____

Number Line Sequences (F) Answers

Fill in the missing numbers on each number line.

