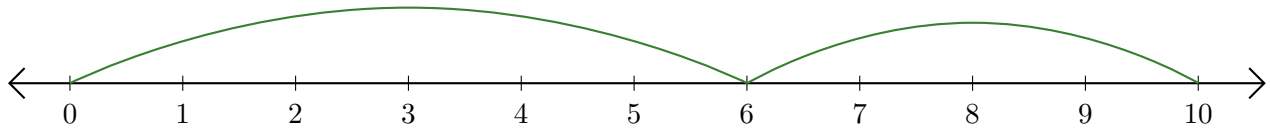


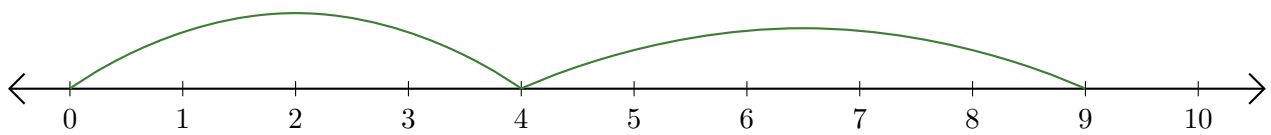
Reading Number Lines (A)

Write the question that each number line demonstrates.

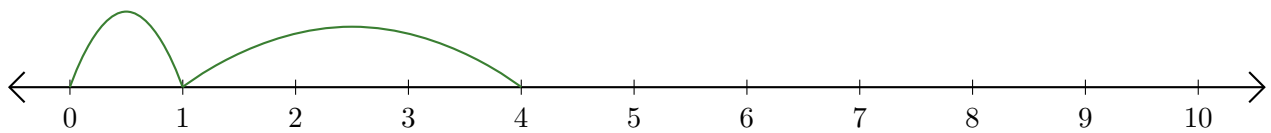
1. $\underline{\quad} + \underline{\quad} = \underline{\quad}$



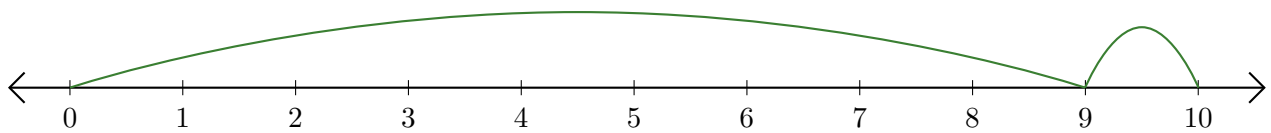
2. $\underline{\quad} + \underline{\quad} = \underline{\quad}$



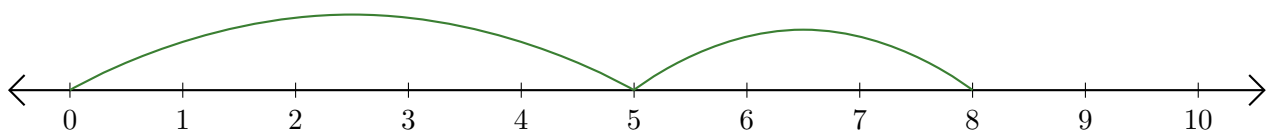
3. $\underline{\quad} + \underline{\quad} = \underline{\quad}$



4. $\underline{\quad} + \underline{\quad} = \underline{\quad}$



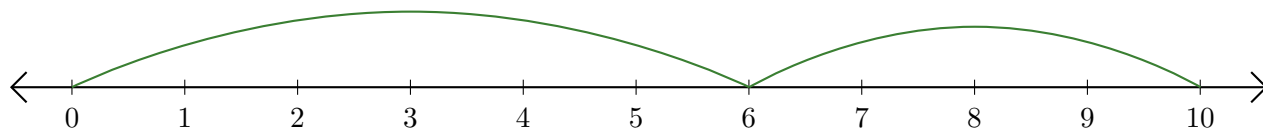
5. $\underline{\quad} + \underline{\quad} = \underline{\quad}$



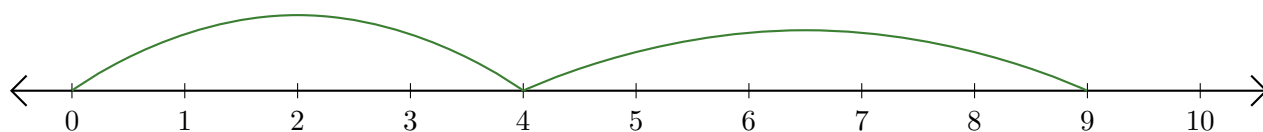
Reading Number Lines (A) Answers

Write the question that each number line demonstrates.

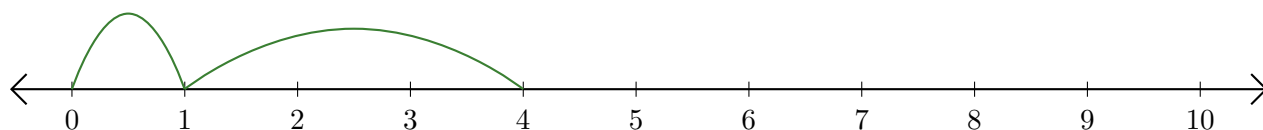
1. $\underline{6} + \underline{4} = \underline{10}$



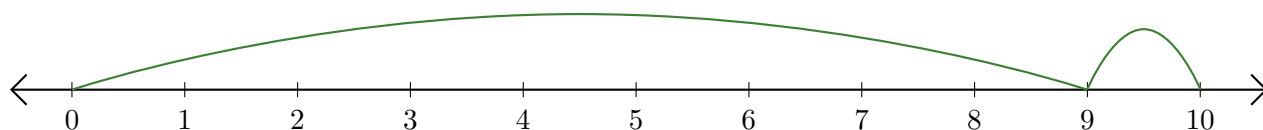
2. $\underline{4} + \underline{5} = \underline{9}$



3. $\underline{1} + \underline{3} = \underline{4}$



4. $\underline{9} + \underline{1} = \underline{10}$



5. $\underline{5} + \underline{3} = \underline{8}$

