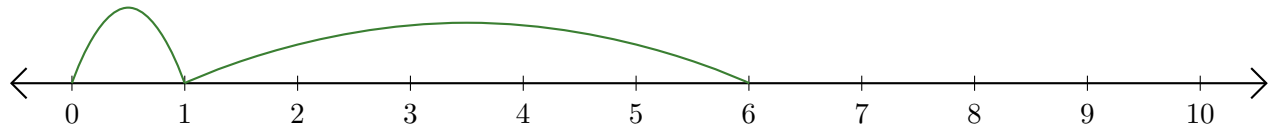


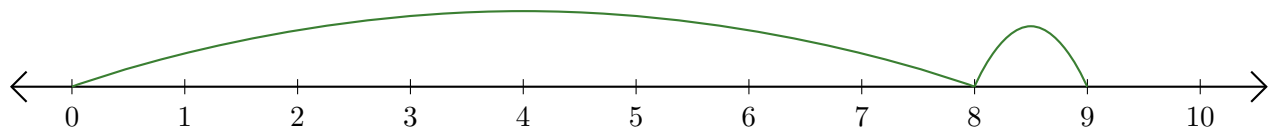
# Reading Number Lines (J)

Write the question that each number line demonstrates.

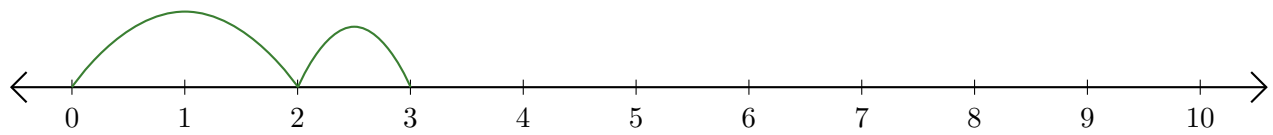
1.  $\underline{\quad} + \underline{\quad} = \underline{\quad}$



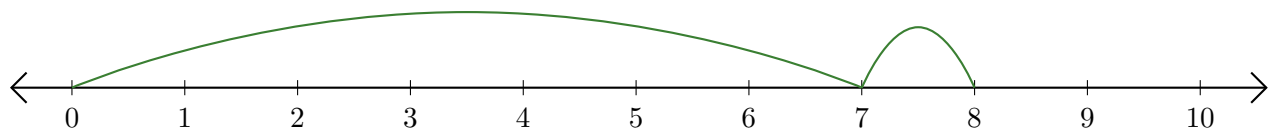
2.  $\underline{\quad} + \underline{\quad} = \underline{\quad}$



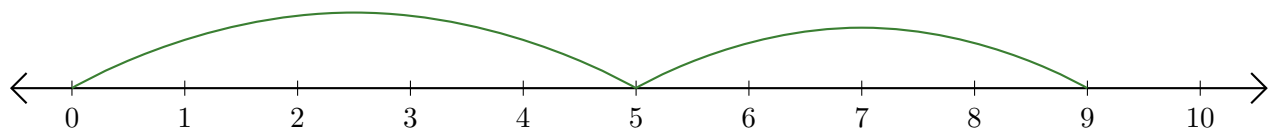
3.  $\underline{\quad} + \underline{\quad} = \underline{\quad}$



4.  $\underline{\quad} + \underline{\quad} = \underline{\quad}$



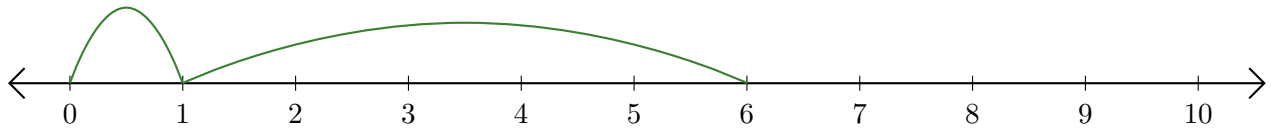
5.  $\underline{\quad} + \underline{\quad} = \underline{\quad}$



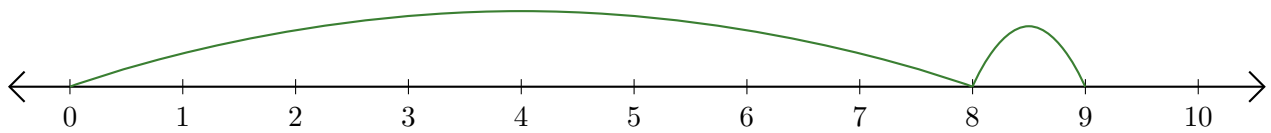
# Reading Number Lines (J) Answers

Write the question that each number line demonstrates.

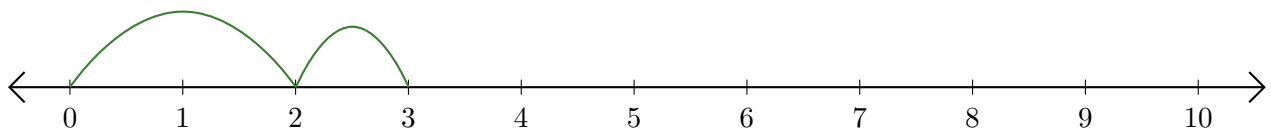
1.  $\underline{1} + \underline{5} = \underline{6}$



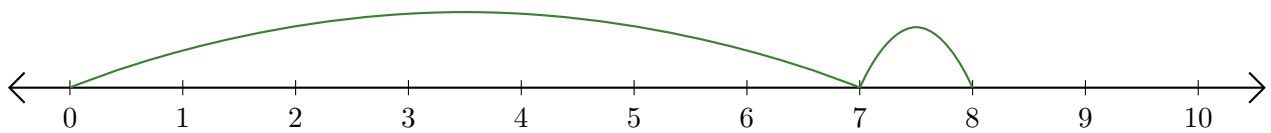
2.  $\underline{8} + \underline{1} = \underline{9}$



3.  $\underline{2} + \underline{1} = \underline{3}$



4.  $\underline{7} + \underline{1} = \underline{8}$



5.  $\underline{5} + \underline{4} = \underline{9}$

