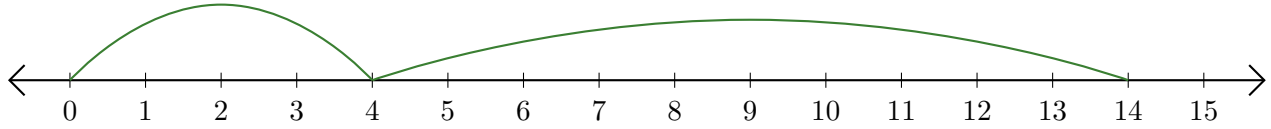


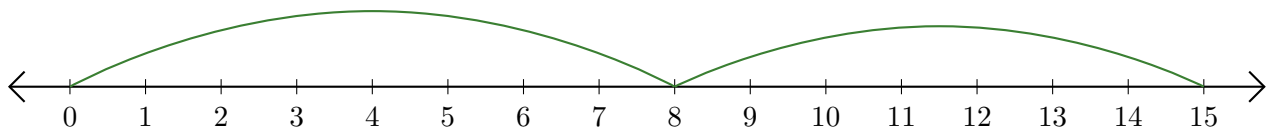
Reading Number Lines (B)

Write the question that each number line demonstrates.

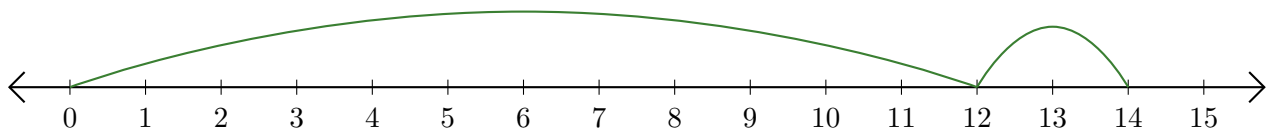
1. $\underline{\quad} + \underline{\quad} = \underline{\quad}$



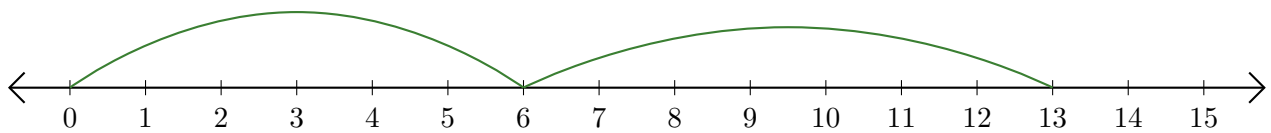
2. $\underline{\quad} + \underline{\quad} = \underline{\quad}$



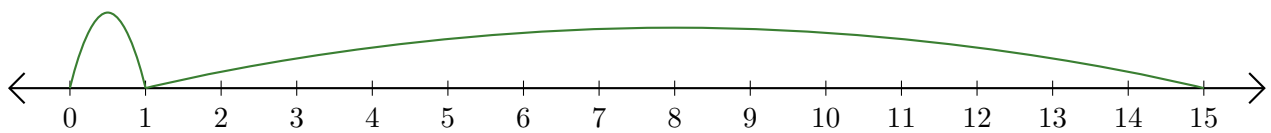
3. $\underline{\quad} + \underline{\quad} = \underline{\quad}$



4. $\underline{\quad} + \underline{\quad} = \underline{\quad}$



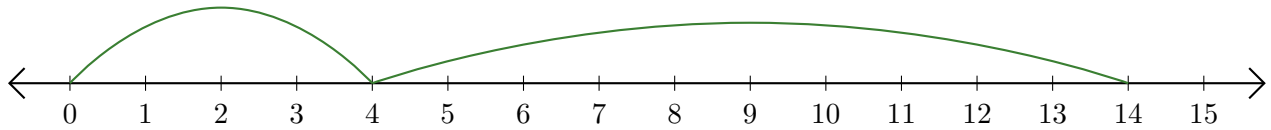
5. $\underline{\quad} + \underline{\quad} = \underline{\quad}$



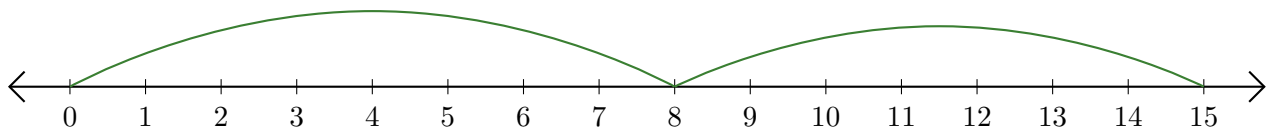
Reading Number Lines (B) Answers

Write the question that each number line demonstrates.

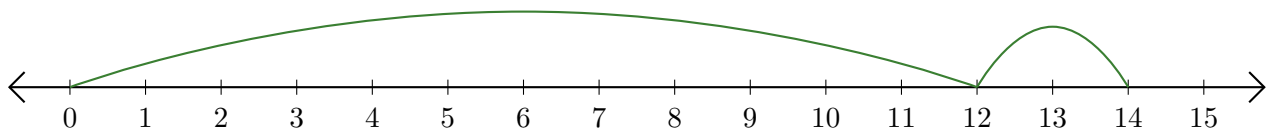
1. $\underline{4} + \underline{10} = \underline{14}$



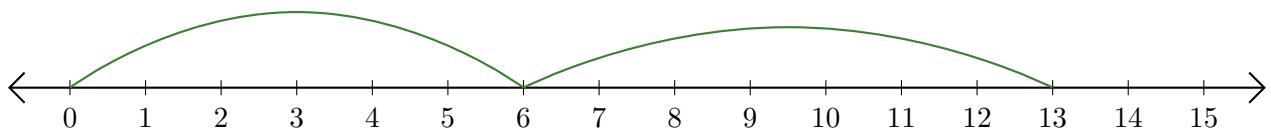
2. $\underline{8} + \underline{7} = \underline{15}$



3. $\underline{12} + \underline{2} = \underline{14}$



4. $\underline{6} + \underline{7} = \underline{13}$



5. $\underline{1} + \underline{14} = \underline{15}$

