

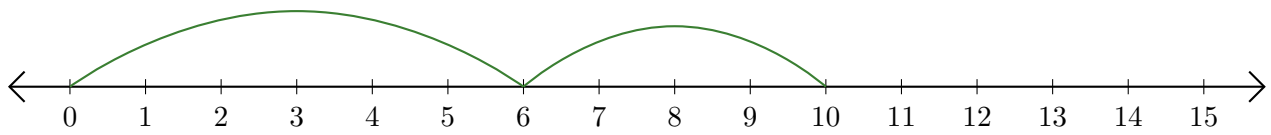
Reading Number Lines (D)

Write the question that each number line demonstrates.

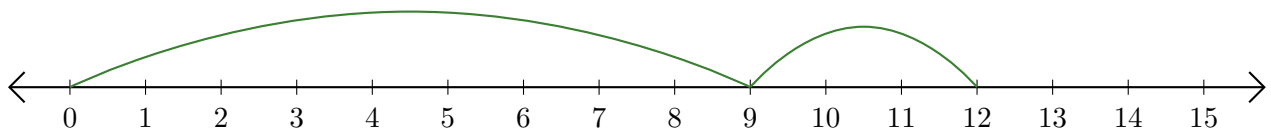
1. $\underline{\quad} + \underline{\quad} = \underline{\quad}$



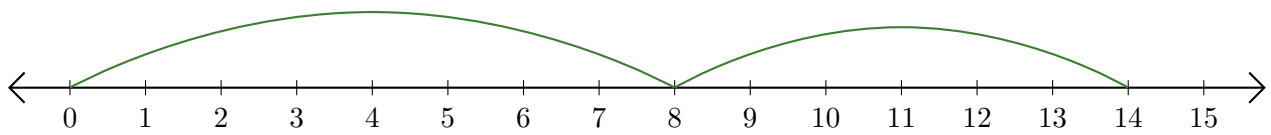
2. $\underline{\quad} + \underline{\quad} = \underline{\quad}$



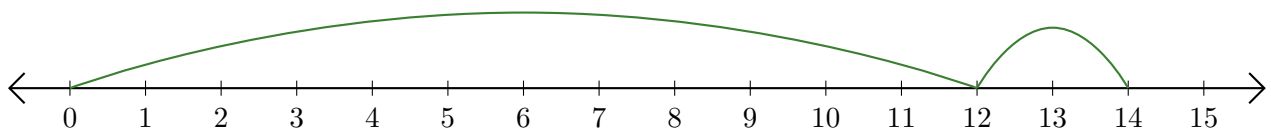
3. $\underline{\quad} + \underline{\quad} = \underline{\quad}$



4. $\underline{\quad} + \underline{\quad} = \underline{\quad}$



5. $\underline{\quad} + \underline{\quad} = \underline{\quad}$



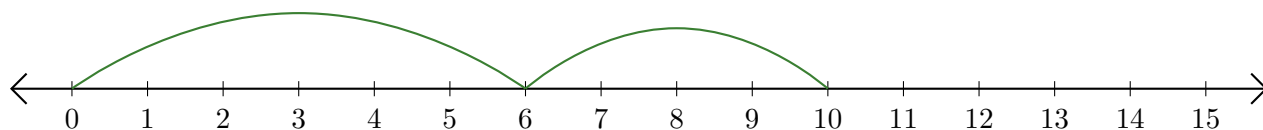
Reading Number Lines (D) Answers

Write the question that each number line demonstrates.

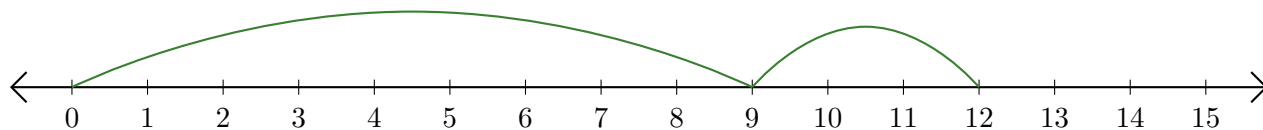
1. $\underline{7} + \underline{5} = \underline{12}$



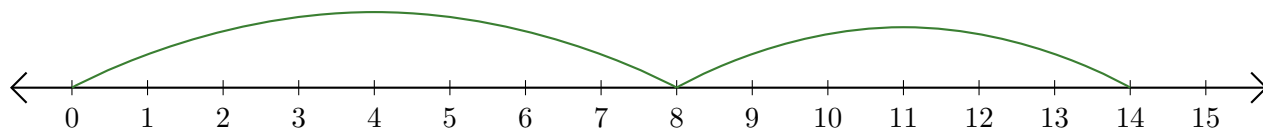
2. $\underline{6} + \underline{4} = \underline{10}$



3. $\underline{9} + \underline{3} = \underline{12}$



4. $\underline{8} + \underline{6} = \underline{14}$



5. $\underline{12} + \underline{2} = \underline{14}$

