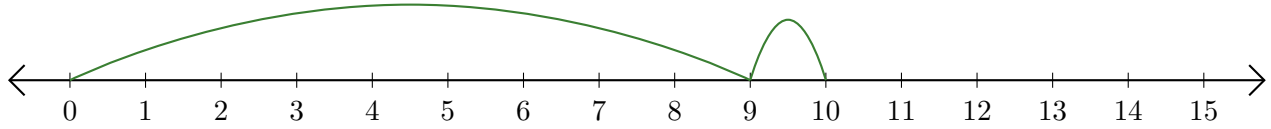


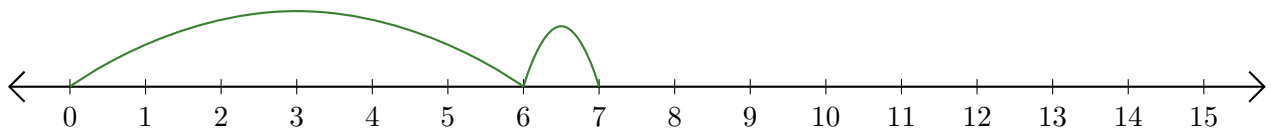
Reading Number Lines (G)

Write the question that each number line demonstrates.

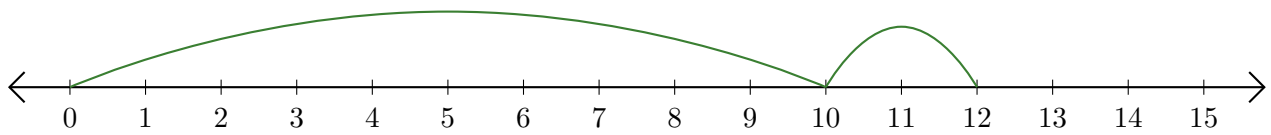
1. $\underline{\quad} + \underline{\quad} = \underline{\quad}$



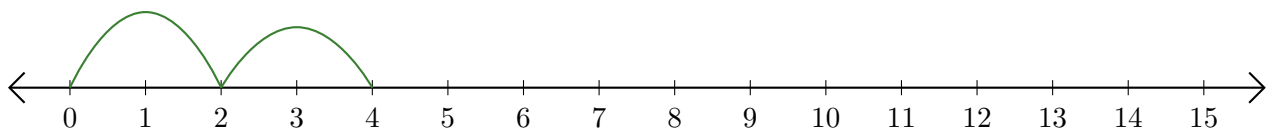
2. $\underline{\quad} + \underline{\quad} = \underline{\quad}$



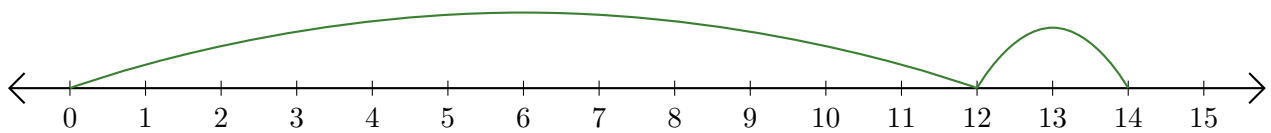
3. $\underline{\quad} + \underline{\quad} = \underline{\quad}$



4. $\underline{\quad} + \underline{\quad} = \underline{\quad}$



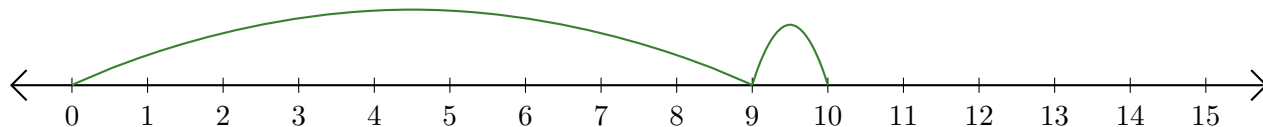
5. $\underline{\quad} + \underline{\quad} = \underline{\quad}$



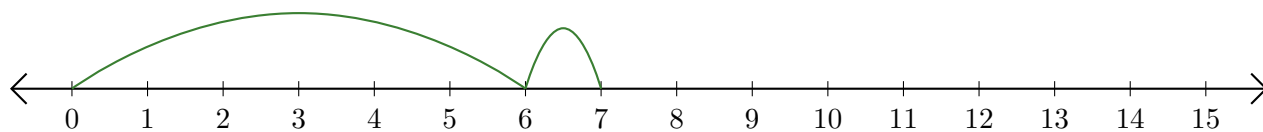
Reading Number Lines (G) Answers

Write the question that each number line demonstrates.

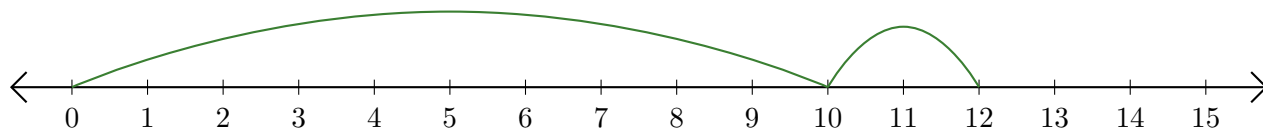
1. $\underline{9} + \underline{1} = \underline{10}$



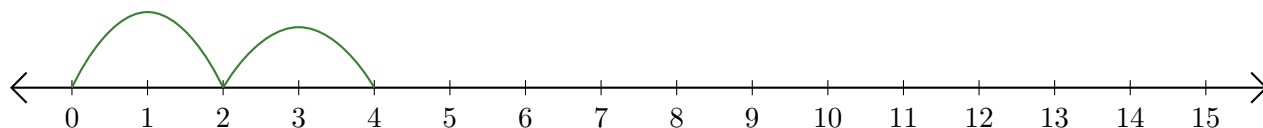
2. $\underline{6} + \underline{1} = \underline{7}$



3. $\underline{10} + \underline{2} = \underline{12}$



4. $\underline{2} + \underline{2} = \underline{4}$



5. $\underline{12} + \underline{2} = \underline{14}$

