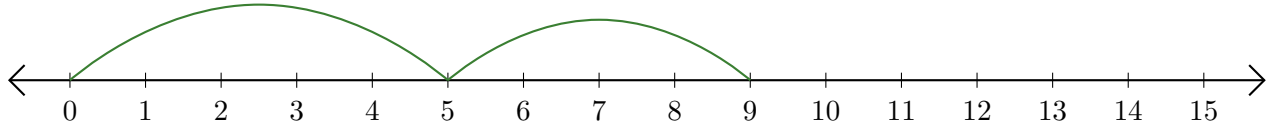


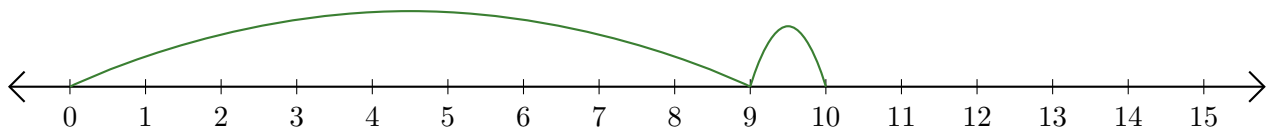
Reading Number Lines (J)

Write the question that each number line demonstrates.

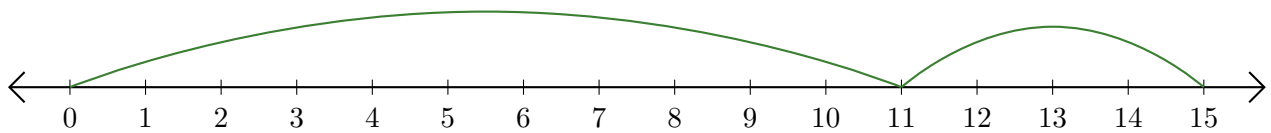
1. $\underline{\quad} + \underline{\quad} = \underline{\quad}$



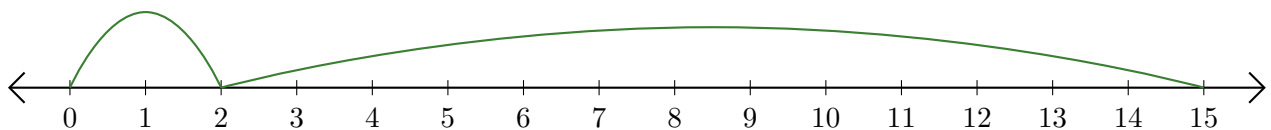
2. $\underline{\quad} + \underline{\quad} = \underline{\quad}$



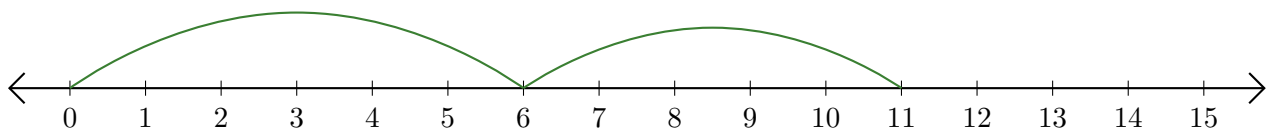
3. $\underline{\quad} + \underline{\quad} = \underline{\quad}$



4. $\underline{\quad} + \underline{\quad} = \underline{\quad}$



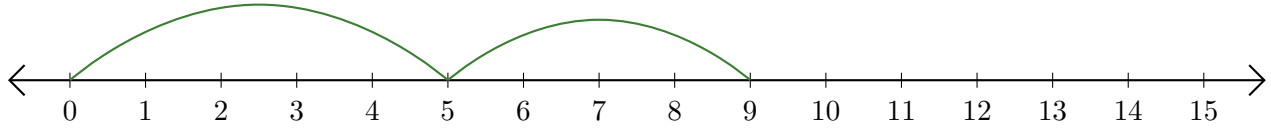
5. $\underline{\quad} + \underline{\quad} = \underline{\quad}$



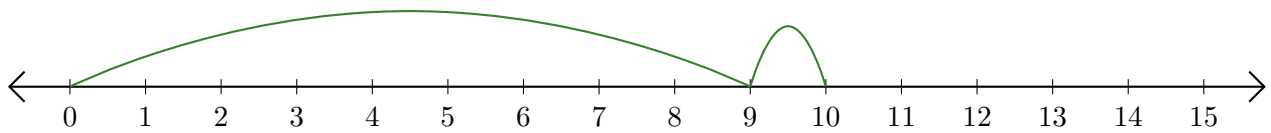
Reading Number Lines (J) Answers

Write the question that each number line demonstrates.

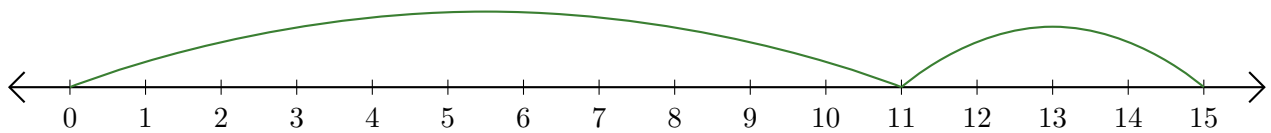
1. $\underline{5} + \underline{4} = \underline{9}$



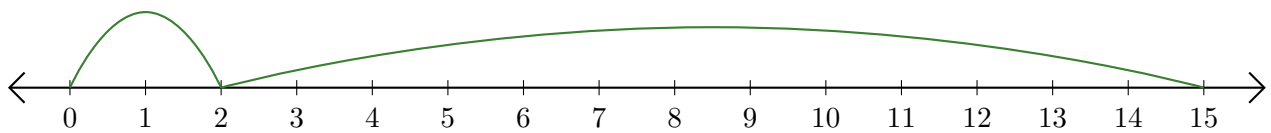
2. $\underline{9} + \underline{1} = \underline{10}$



3. $\underline{11} + \underline{4} = \underline{15}$



4. $\underline{2} + \underline{13} = \underline{15}$



5. $\underline{6} + \underline{5} = \underline{11}$

