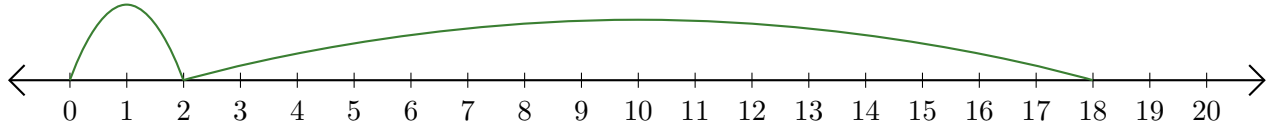


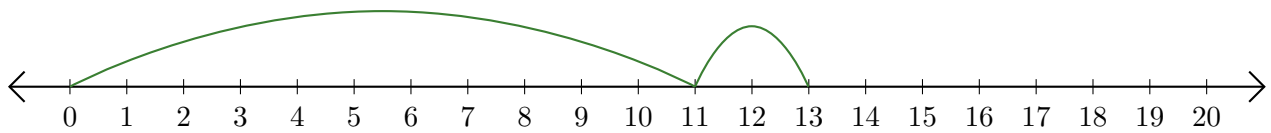
Reading Number Lines (A)

Write the question that each number line demonstrates.

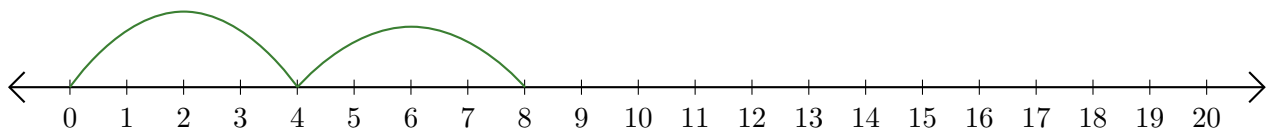
1. $\underline{\quad} + \underline{\quad} = \underline{\quad}$



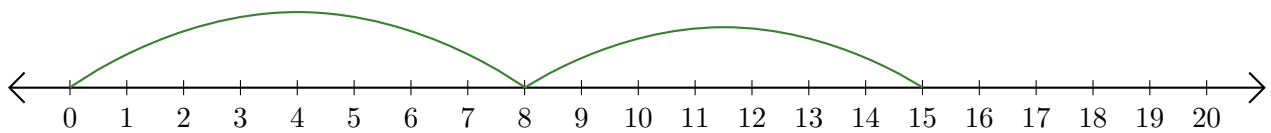
2. $\underline{\quad} + \underline{\quad} = \underline{\quad}$



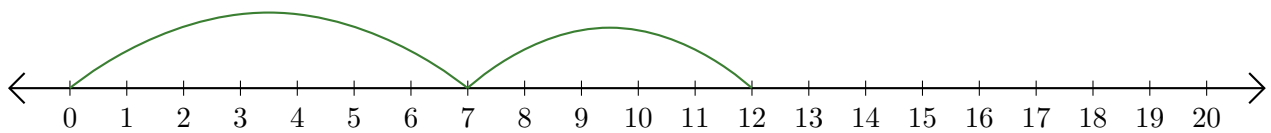
3. $\underline{\quad} + \underline{\quad} = \underline{\quad}$



4. $\underline{\quad} + \underline{\quad} = \underline{\quad}$



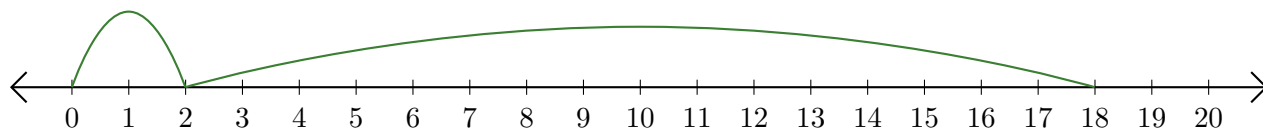
5. $\underline{\quad} + \underline{\quad} = \underline{\quad}$



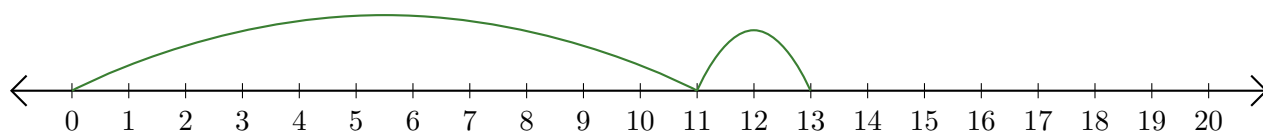
Reading Number Lines (A) Answers

Write the question that each number line demonstrates.

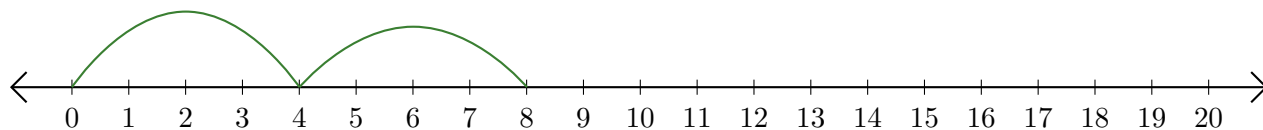
1. $\underline{2} + \underline{16} = \underline{18}$



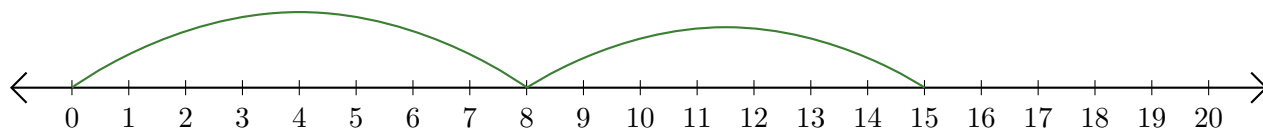
2. $\underline{11} + \underline{2} = \underline{13}$



3. $\underline{4} + \underline{4} = \underline{8}$



4. $\underline{8} + \underline{7} = \underline{15}$



5. $\underline{7} + \underline{5} = \underline{12}$

