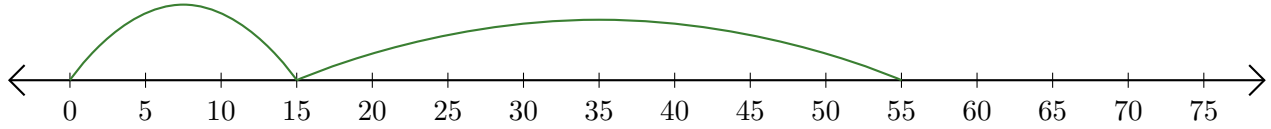


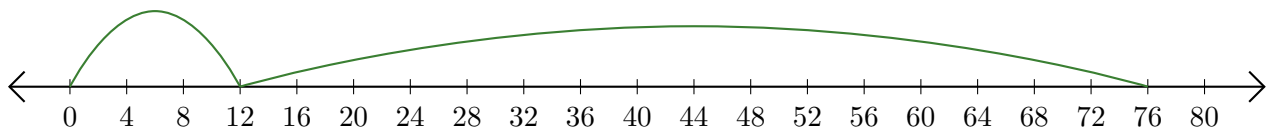
Reading Number Lines (J)

Write the question that each number line demonstrates.

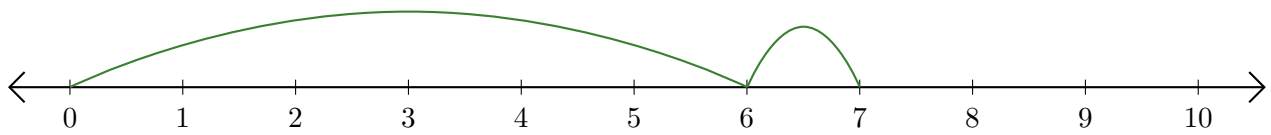
1. $\underline{\quad} + \underline{\quad} = \underline{\quad}$



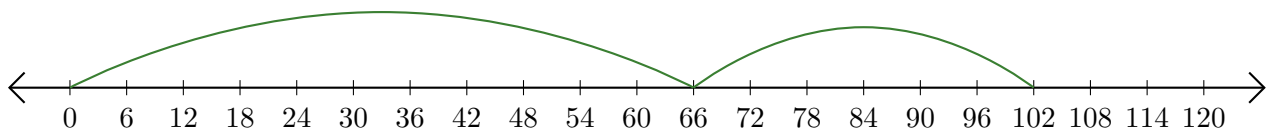
2. $\underline{\quad} + \underline{\quad} = \underline{\quad}$



3. $\underline{\quad} + \underline{\quad} = \underline{\quad}$



4. $\underline{\quad} + \underline{\quad} = \underline{\quad}$



5. $\underline{\quad} + \underline{\quad} = \underline{\quad}$

