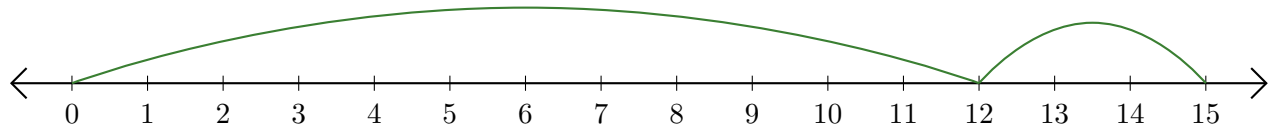


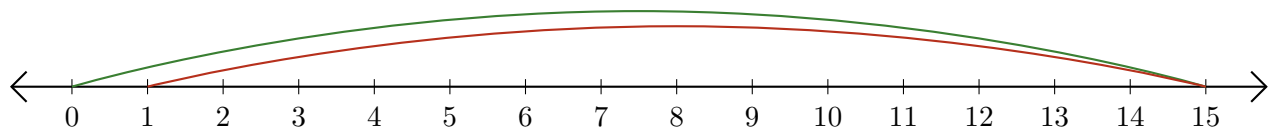
Reading Number Lines (E)

Write the question that each number line demonstrates.

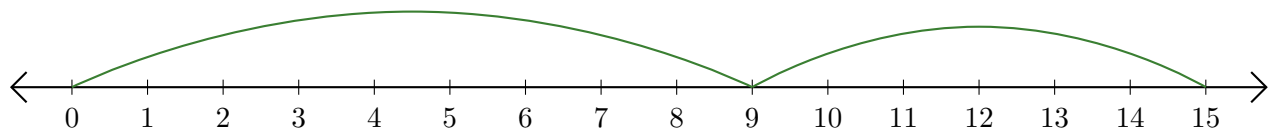
1. $\underline{\quad} + \underline{\quad} = \underline{\quad}$



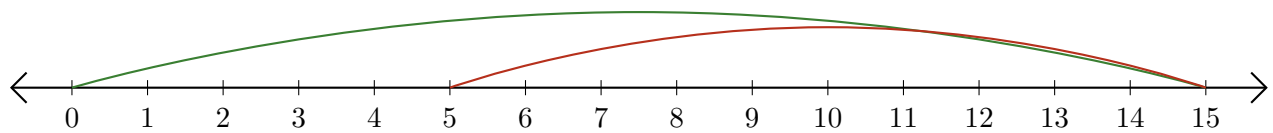
2. $\underline{\quad} - \underline{\quad} = \underline{\quad}$



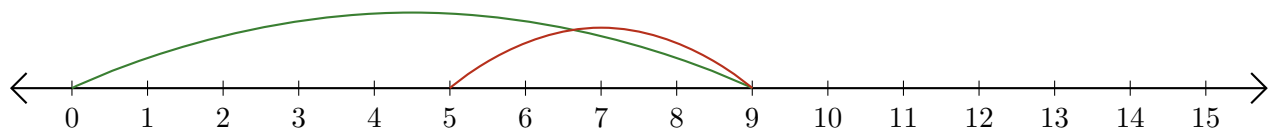
3. $\underline{\quad} + \underline{\quad} = \underline{\quad}$



4. $\underline{\quad} - \underline{\quad} = \underline{\quad}$



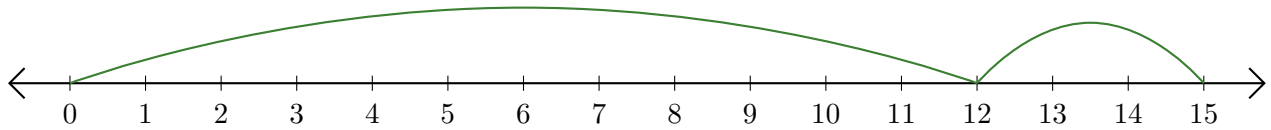
5. $\underline{\quad} - \underline{\quad} = \underline{\quad}$



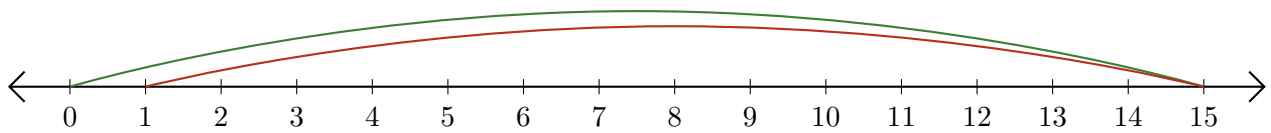
Reading Number Lines (E) Answers

Write the question that each number line demonstrates.

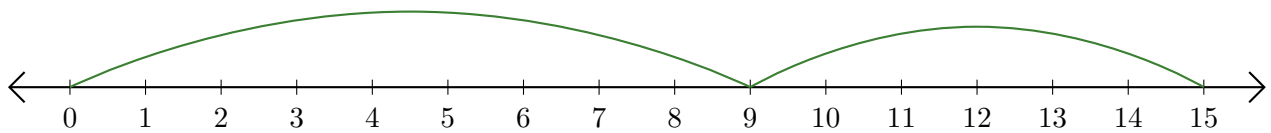
1. $\underline{12} + \underline{3} = \underline{15}$



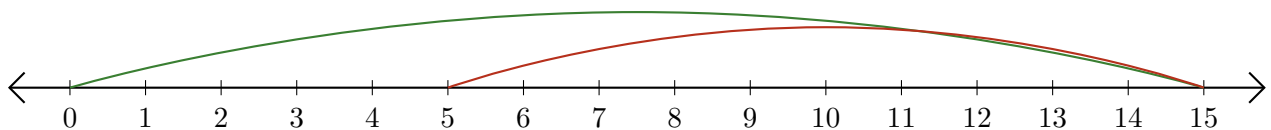
2. $\underline{15} - \underline{14} = \underline{1}$



3. $\underline{9} + \underline{6} = \underline{15}$



4. $\underline{15} - \underline{10} = \underline{5}$



5. $\underline{9} - \underline{4} = \underline{5}$

