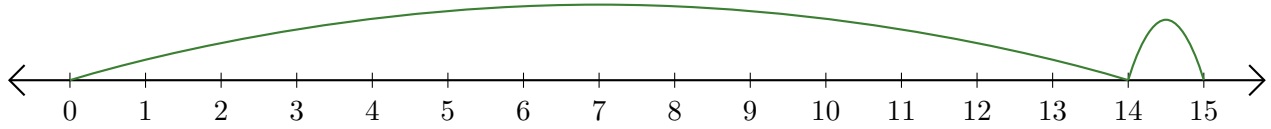


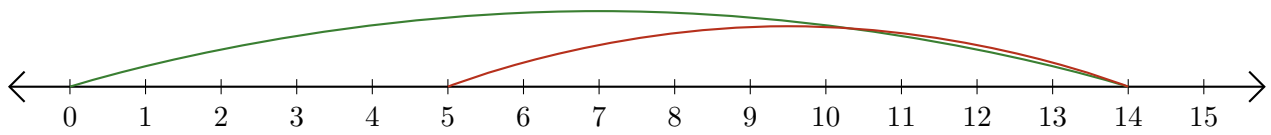
Reading Number Lines (F)

Write the question that each number line demonstrates.

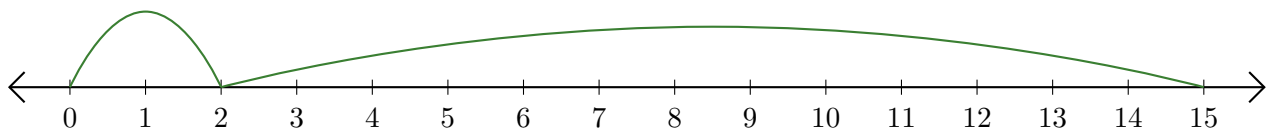
1. $\underline{\quad} + \underline{\quad} = \underline{\quad}$



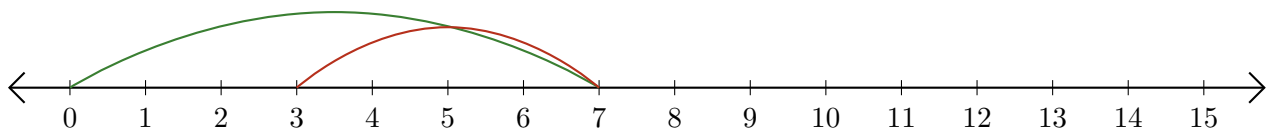
2. $\underline{\quad} - \underline{\quad} = \underline{\quad}$



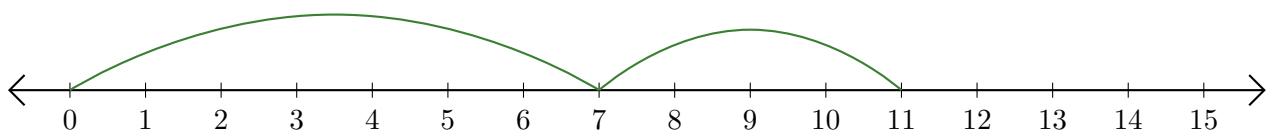
3. $\underline{\quad} + \underline{\quad} = \underline{\quad}$



4. $\underline{\quad} - \underline{\quad} = \underline{\quad}$



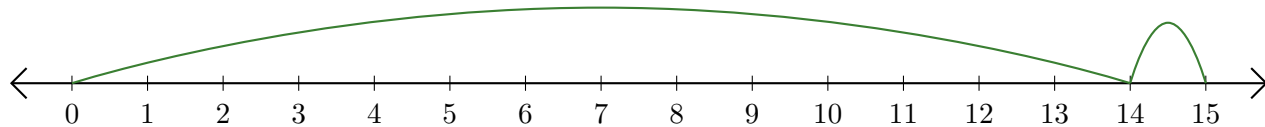
5. $\underline{\quad} + \underline{\quad} = \underline{\quad}$



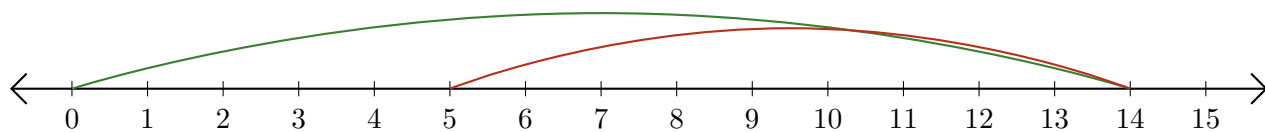
Reading Number Lines (F) Answers

Write the question that each number line demonstrates.

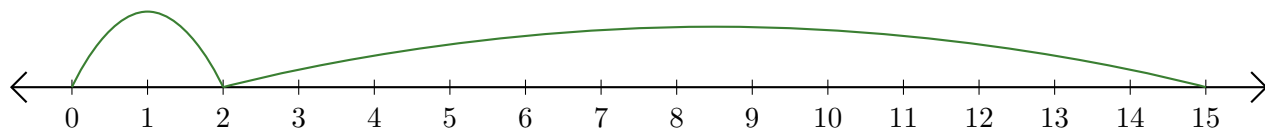
1. $\underline{14} + \underline{1} = \underline{15}$



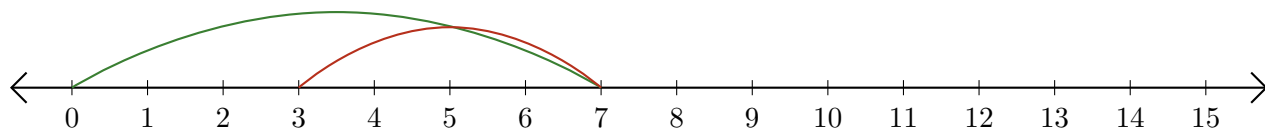
2. $\underline{14} - \underline{9} = \underline{5}$



3. $\underline{2} + \underline{13} = \underline{15}$



4. $\underline{7} - \underline{4} = \underline{3}$



5. $\underline{7} + \underline{4} = \underline{11}$

