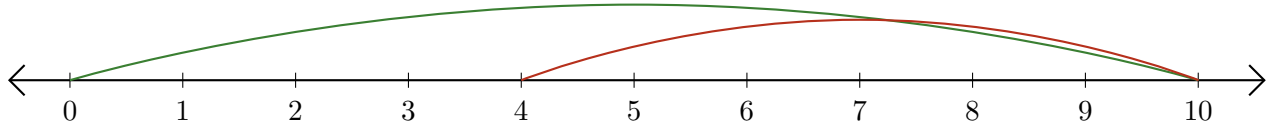


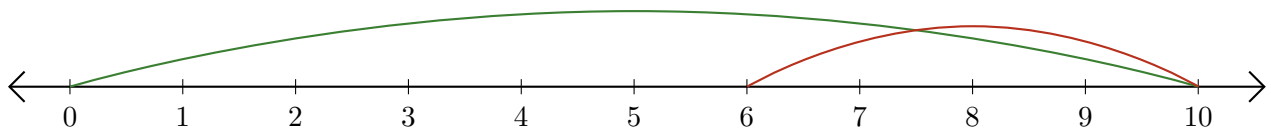
Reading Number Lines (E)

Write the question that each number line demonstrates.

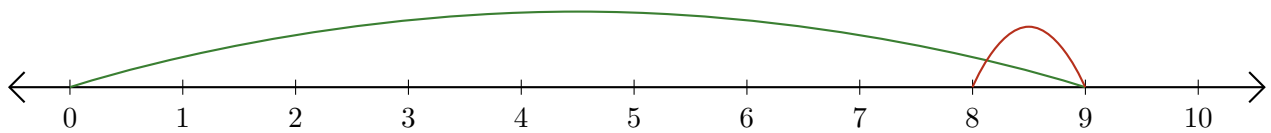
1. $\underline{\quad} - \underline{\quad} = \underline{\quad}$



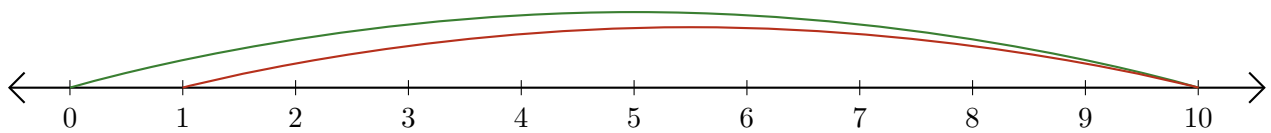
2. $\underline{\quad} - \underline{\quad} = \underline{\quad}$



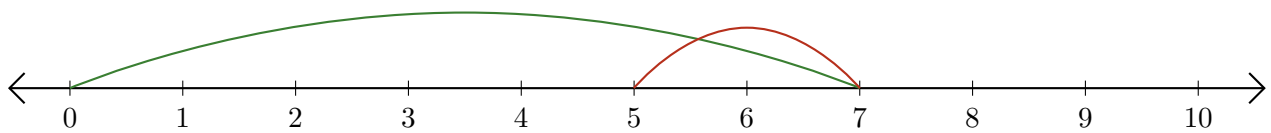
3. $\underline{\quad} - \underline{\quad} = \underline{\quad}$



4. $\underline{\quad} - \underline{\quad} = \underline{\quad}$



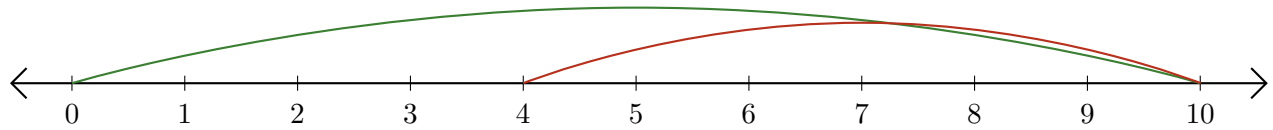
5. $\underline{\quad} - \underline{\quad} = \underline{\quad}$



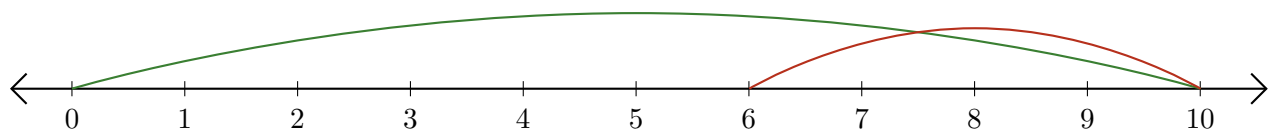
Reading Number Lines (E) Answers

Write the question that each number line demonstrates.

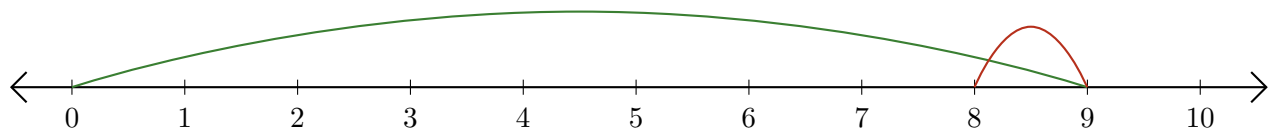
1. $\underline{10} - \underline{6} = \underline{4}$



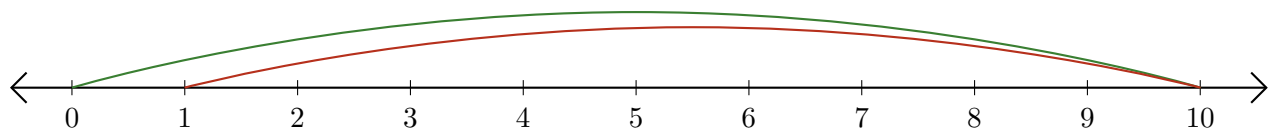
2. $\underline{10} - \underline{4} = \underline{6}$



3. $\underline{9} - \underline{1} = \underline{8}$



4. $\underline{10} - \underline{9} = \underline{1}$



5. $\underline{7} - \underline{2} = \underline{5}$

