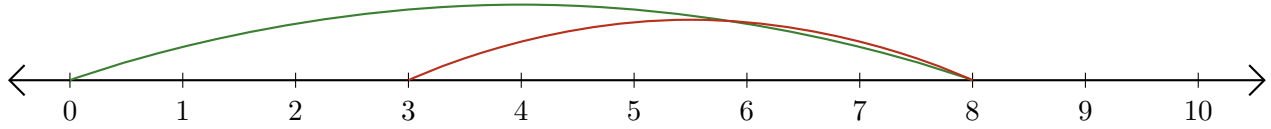


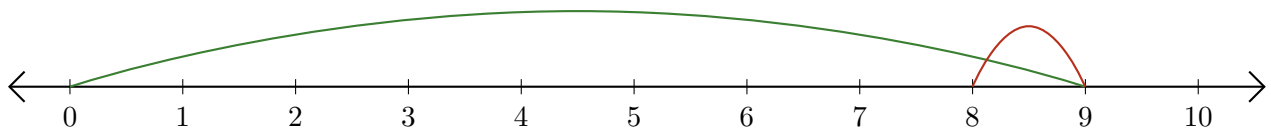
Reading Number Lines (H)

Write the question that each number line demonstrates.

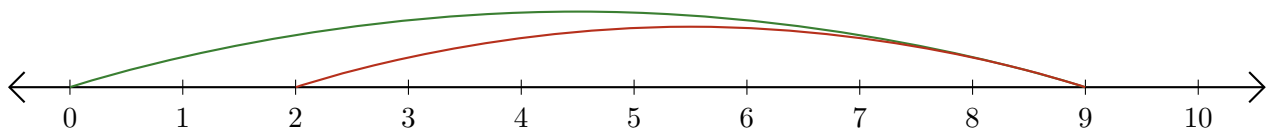
1. $\underline{\quad} - \underline{\quad} = \underline{\quad}$



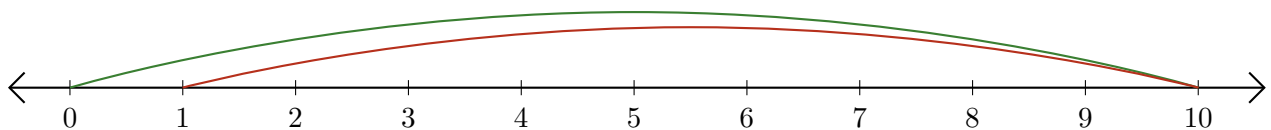
2. $\underline{\quad} - \underline{\quad} = \underline{\quad}$



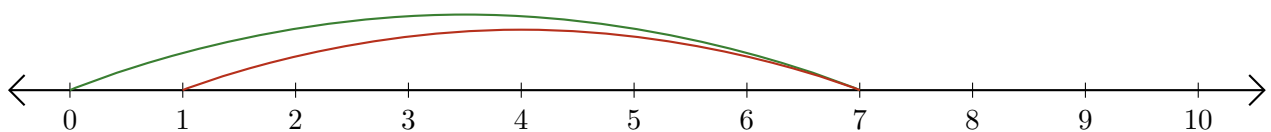
3. $\underline{\quad} - \underline{\quad} = \underline{\quad}$



4. $\underline{\quad} - \underline{\quad} = \underline{\quad}$



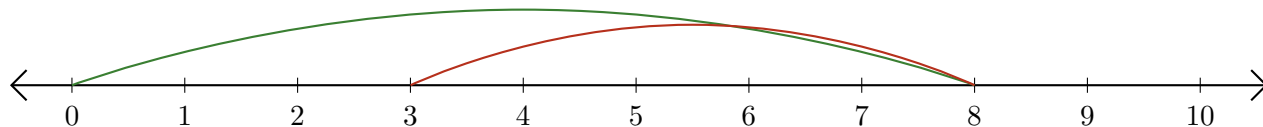
5. $\underline{\quad} - \underline{\quad} = \underline{\quad}$



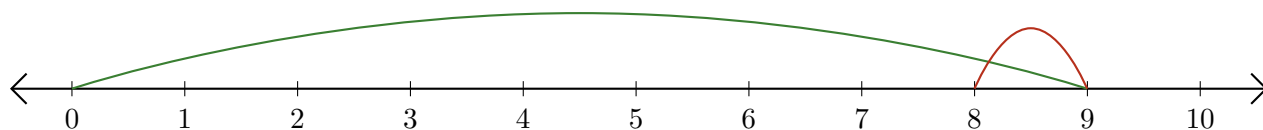
Reading Number Lines (H) Answers

Write the question that each number line demonstrates.

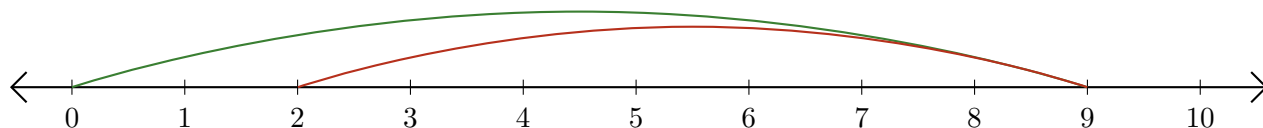
1. $\underline{8} - \underline{5} = \underline{3}$



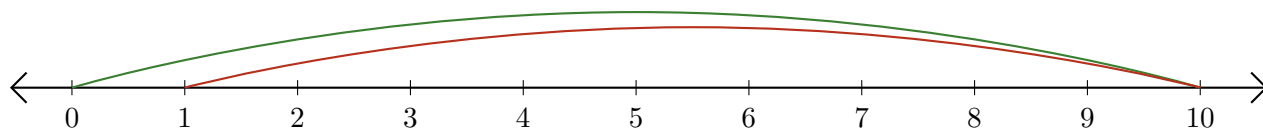
2. $\underline{9} - \underline{1} = \underline{8}$



3. $\underline{9} - \underline{7} = \underline{2}$



4. $\underline{10} - \underline{9} = \underline{1}$



5. $\underline{7} - \underline{6} = \underline{1}$

