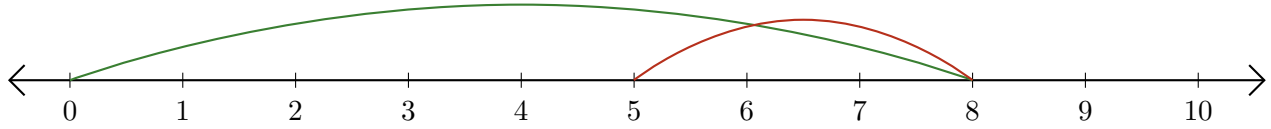


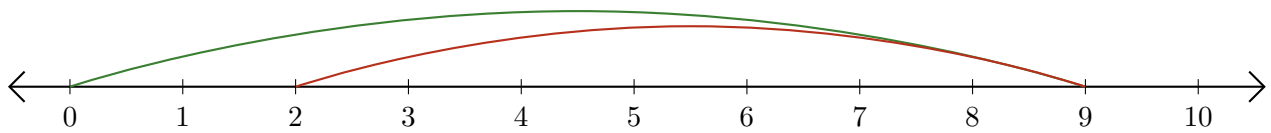
Reading Number Lines (J)

Write the question that each number line demonstrates.

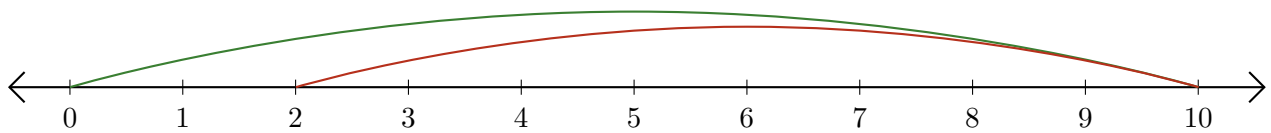
1. $\underline{\quad} - \underline{\quad} = \underline{\quad}$



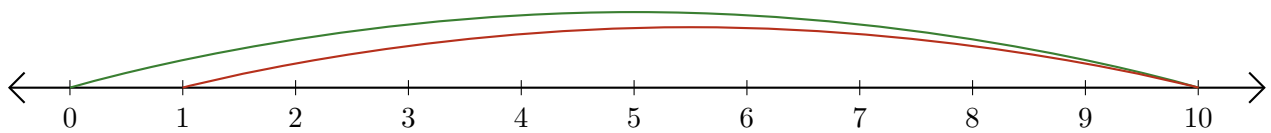
2. $\underline{\quad} - \underline{\quad} = \underline{\quad}$



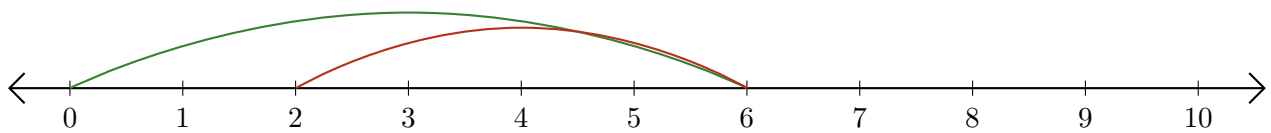
3. $\underline{\quad} - \underline{\quad} = \underline{\quad}$



4. $\underline{\quad} - \underline{\quad} = \underline{\quad}$



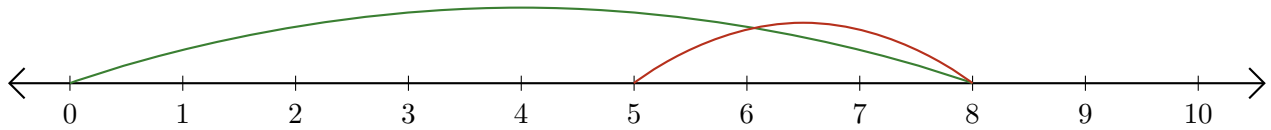
5. $\underline{\quad} - \underline{\quad} = \underline{\quad}$



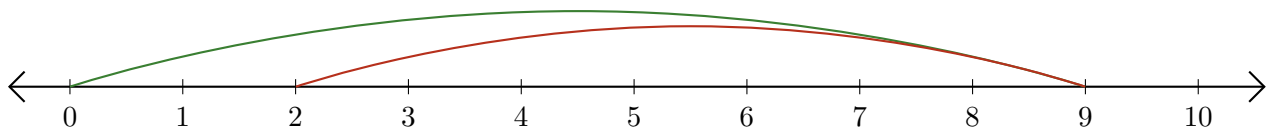
Reading Number Lines (J) Answers

Write the question that each number line demonstrates.

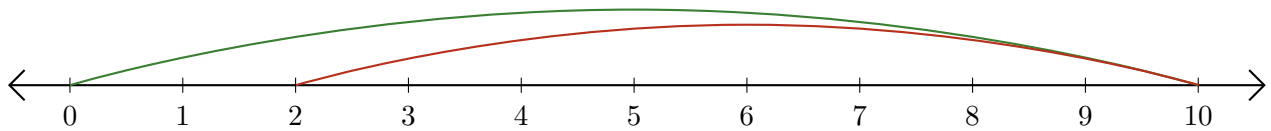
1. $\underline{8} - \underline{3} = \underline{5}$



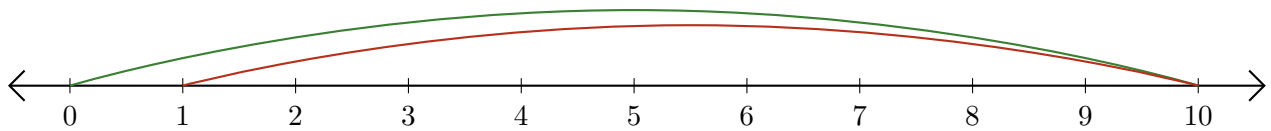
2. $\underline{9} - \underline{7} = \underline{2}$



3. $\underline{10} - \underline{8} = \underline{2}$



4. $\underline{10} - \underline{9} = \underline{1}$



5. $\underline{6} - \underline{4} = \underline{2}$

