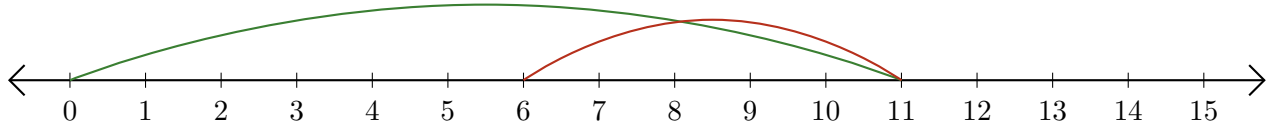


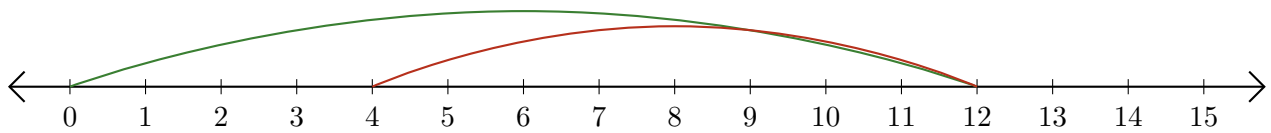
Reading Number Lines (I)

Write the question that each number line demonstrates.

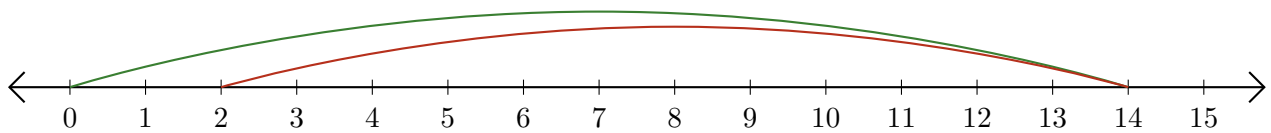
1. $\underline{\quad} - \underline{\quad} = \underline{\quad}$



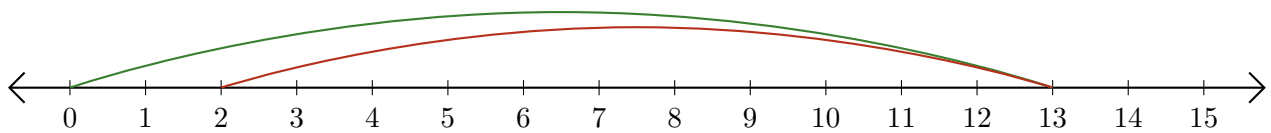
2. $\underline{\quad} - \underline{\quad} = \underline{\quad}$



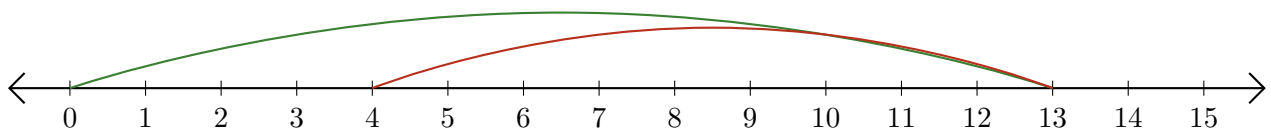
3. $\underline{\quad} - \underline{\quad} = \underline{\quad}$



4. $\underline{\quad} - \underline{\quad} = \underline{\quad}$



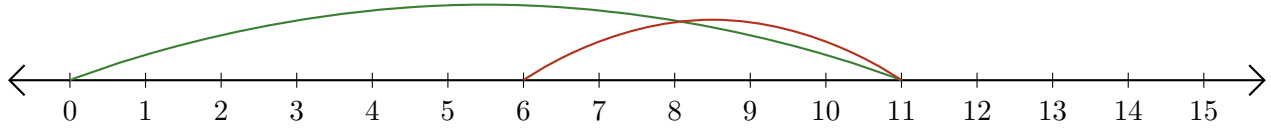
5. $\underline{\quad} - \underline{\quad} = \underline{\quad}$



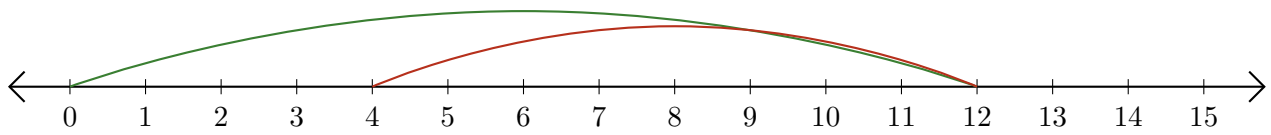
Reading Number Lines (I) Answers

Write the question that each number line demonstrates.

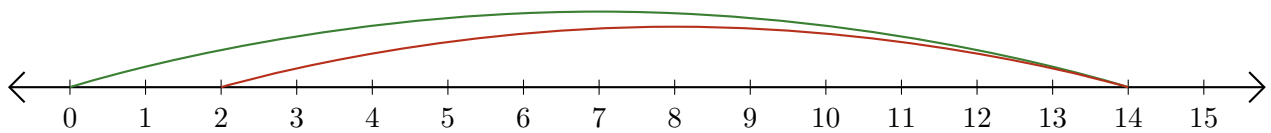
1. $\underline{11} - \underline{5} = \underline{6}$



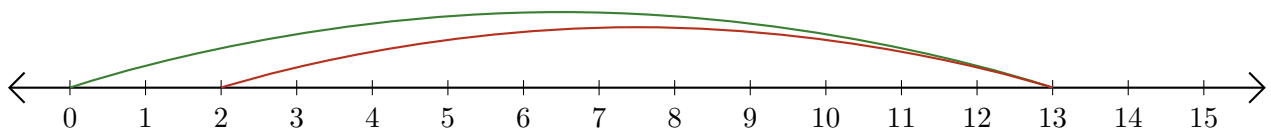
2. $\underline{12} - \underline{8} = \underline{4}$



3. $\underline{14} - \underline{12} = \underline{2}$



4. $\underline{13} - \underline{11} = \underline{2}$



5. $\underline{13} - \underline{9} = \underline{4}$

