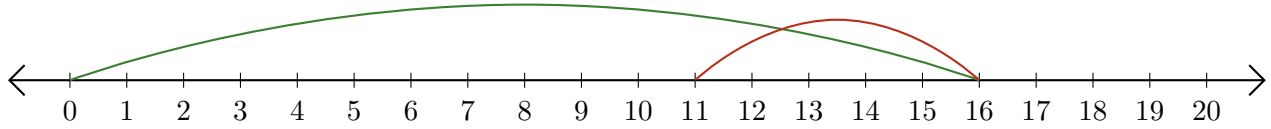


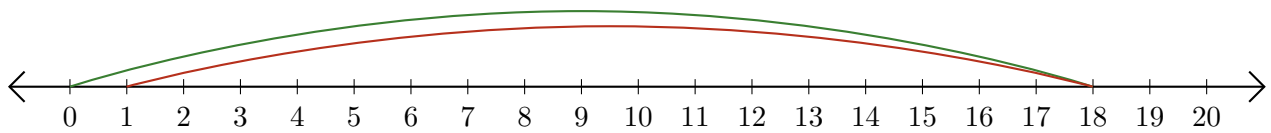
Reading Number Lines (A)

Write the question that each number line demonstrates.

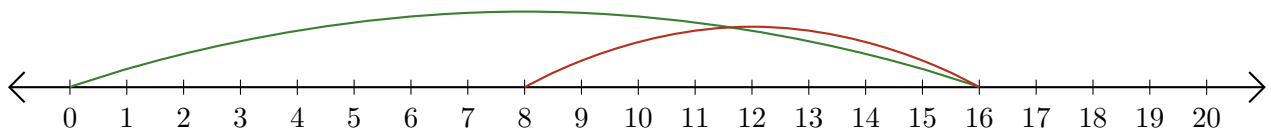
1. $\underline{\quad} - \underline{\quad} = \underline{\quad}$



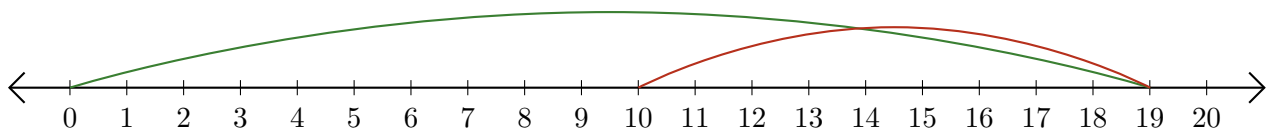
2. $\underline{\quad} - \underline{\quad} = \underline{\quad}$



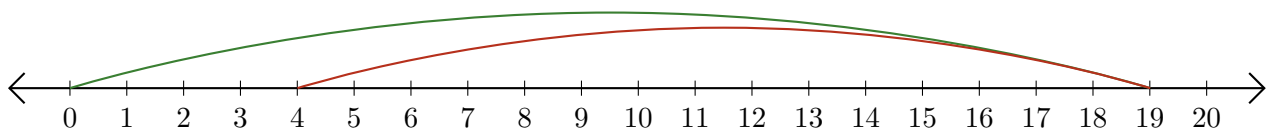
3. $\underline{\quad} - \underline{\quad} = \underline{\quad}$



4. $\underline{\quad} - \underline{\quad} = \underline{\quad}$



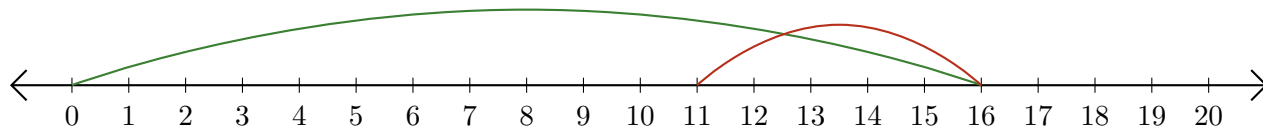
5. $\underline{\quad} - \underline{\quad} = \underline{\quad}$



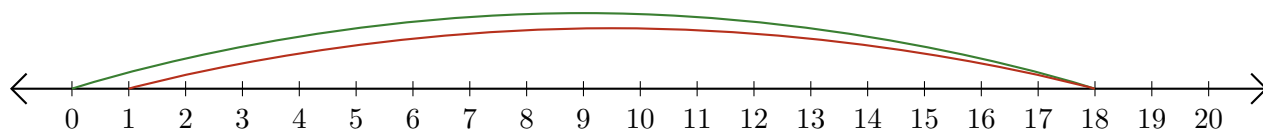
Reading Number Lines (A) Answers

Write the question that each number line demonstrates.

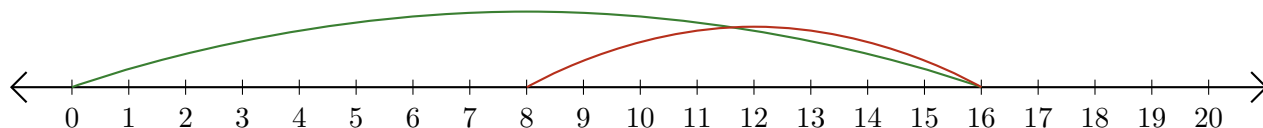
1. $\underline{16} - \underline{5} = \underline{11}$



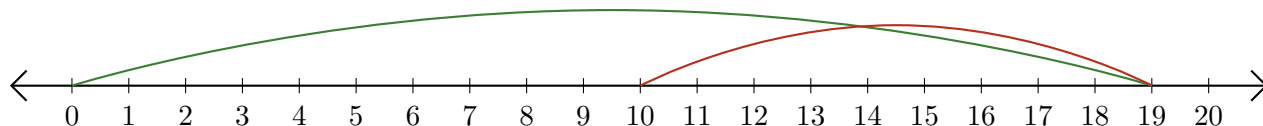
2. $\underline{18} - \underline{17} = \underline{1}$



3. $\underline{16} - \underline{8} = \underline{8}$



4. $\underline{19} - \underline{9} = \underline{10}$



5. $\underline{19} - \underline{15} = \underline{4}$

