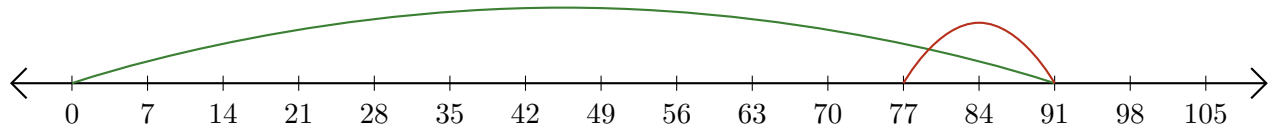


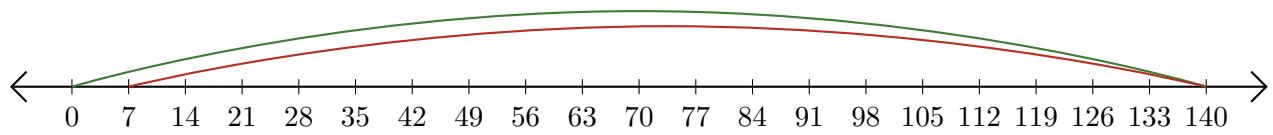
# Reading Number Lines (F)

Write the question that each number line demonstrates.

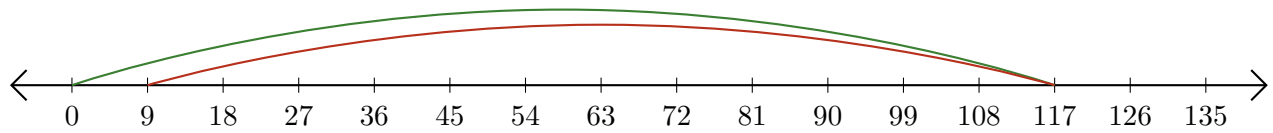
1.  $\underline{\quad} - \underline{\quad} = \underline{\quad}$



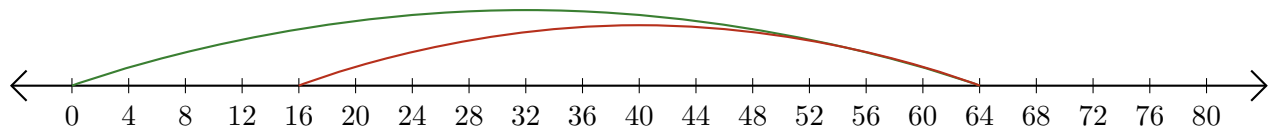
2.  $\underline{\quad} - \underline{\quad} = \underline{\quad}$



3.  $\underline{\quad} - \underline{\quad} = \underline{\quad}$



4.  $\underline{\quad} - \underline{\quad} = \underline{\quad}$



5.  $\underline{\quad} - \underline{\quad} = \underline{\quad}$

