



# Counting Animals (A)

Count the number of animals in each group.




# Counting Animals (A) Answers

Count the number of animals in each group.


6



4



8



16

