


# Counting Animals (E)


Count the number of animals in each group.



# Counting Animals (E) Answers

Count the number of animals in each group.


15



6



4



6

