

## Prime Factors (D)

Use a tree diagram to find the prime factors of each number.

18

6

6

44

26

12

35

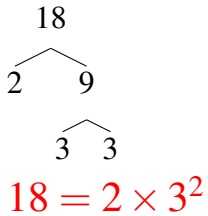
12

16

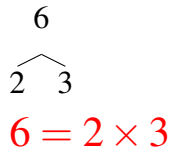
## Prime Factors (D) Answers

Use a tree diagram to find the prime factors of each number.

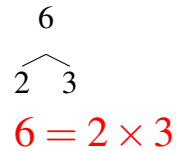
18



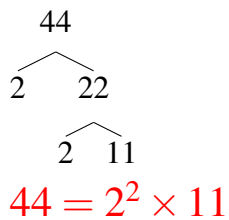
6



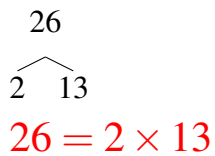
6



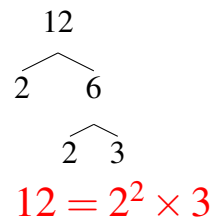
44



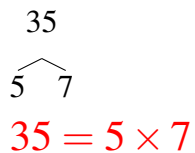
26



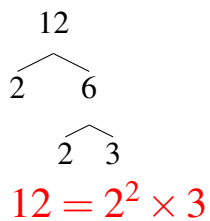
12



35



12



16

