

Prime Factors (I)

Use a tree diagram to find the prime factors of each number.

32

45

10

46

22

42

46

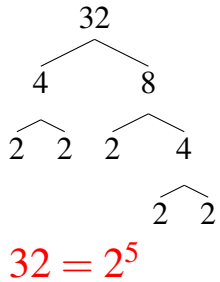
32

46

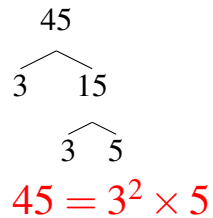
Prime Factors (I) Answers

Use a tree diagram to find the prime factors of each number.

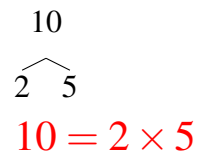
32



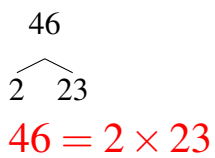
45



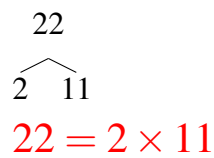
10



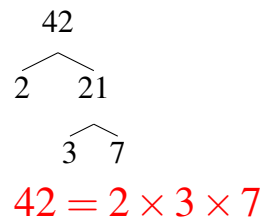
46



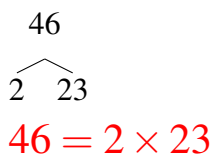
22



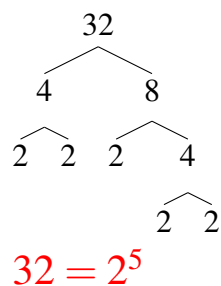
42



46



32



46

