

## Prime Factors (A)

Use a tree diagram to find the prime factors of each number.

28

65

9

24

96

51

35

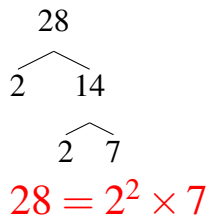
18

27

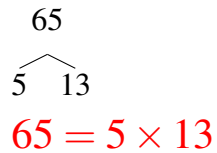
## Prime Factors (A) Answers

Use a tree diagram to find the prime factors of each number.

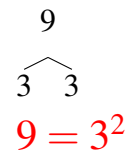
28



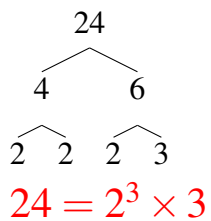
65



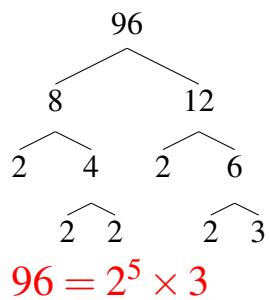
9



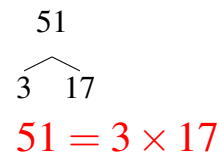
24



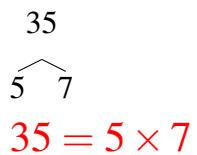
96



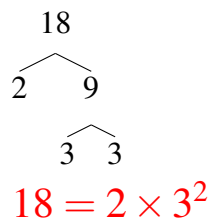
51



35



18



27

