

Prime Factors (F)

Use a tree diagram to find the prime factors of each number.

48

160

123

106

169

64

153

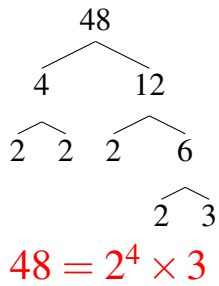
130

162

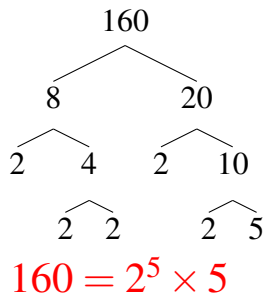
Prime Factors (F) Answers

Use a tree diagram to find the prime factors of each number.

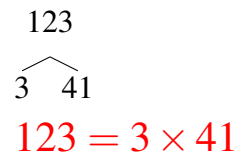
48



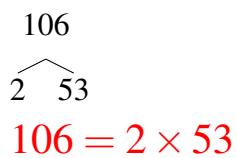
160



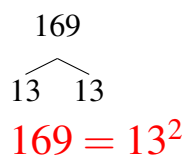
123



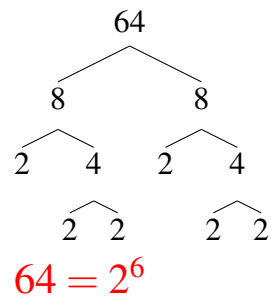
106



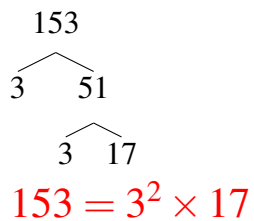
169



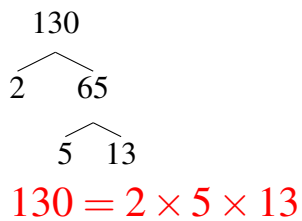
64



153



130



162

