

## Prime Factors (C)

Use a tree diagram to find the prime factors of each number.

210

168

203

122

117

140

119

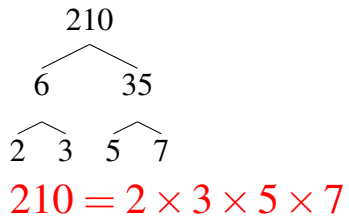
57

196

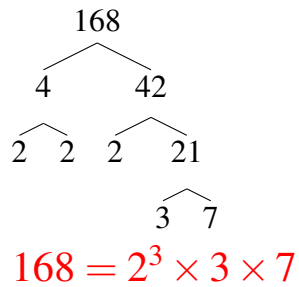
## Prime Factors (C) Answers

Use a tree diagram to find the prime factors of each number.

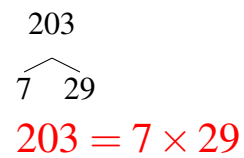
210



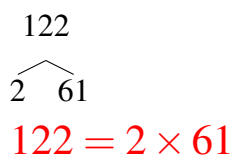
168



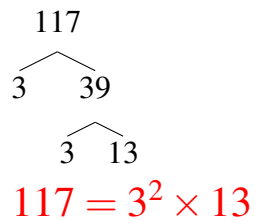
203



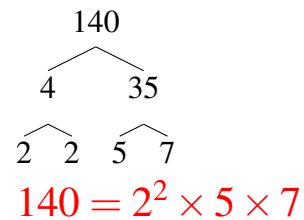
122



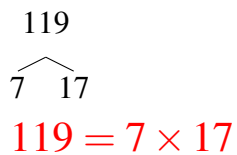
117



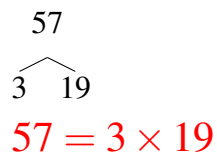
140



119



57



196

