



# Counting by 7's (I)


Fill in the blanks.



7




\_\_\_\_\_



21

\_\_\_\_\_



\_\_\_\_\_




\_\_\_\_\_




\_\_\_\_\_



\_\_\_\_\_



\_\_\_\_\_



\_\_\_\_\_




\_\_\_\_\_




\_\_\_\_\_




\_\_\_\_\_




98




\_\_\_\_\_




\_\_\_\_\_




\_\_\_\_\_




\_\_\_\_\_




133




\_\_\_\_\_




147




\_\_\_\_\_




\_\_\_\_\_




\_\_\_\_\_




\_\_\_\_\_




182




\_\_\_\_\_



\_\_\_\_\_



\_\_\_\_\_



\_\_\_\_\_