



# Counting by 8's (H)

Fill in the blanks.



8

---



\_\_\_\_\_



\_\_\_\_\_



\_\_\_\_\_




\_\_\_\_\_



\_\_\_\_\_



\_\_\_\_\_



64




\_\_\_\_\_



\_\_\_\_\_



\_\_\_\_\_



96




\_\_\_\_\_



\_\_\_\_\_



\_\_\_\_\_



128



\_\_\_\_\_



\_\_\_\_\_



\_\_\_\_\_



\_\_\_\_\_



\_\_\_\_\_




\_\_\_\_\_



\_\_\_\_\_



\_\_\_\_\_



200



\_\_\_\_\_



\_\_\_\_\_



\_\_\_\_\_



\_\_\_\_\_



\_\_\_\_\_