

# Counting by 10's (C)

Fill in the blanks.



10

—



70

—



40

—



90

—




110

—




—






170

—




—



250

—



—

