


# Counting by 11's (B)

Fill in the blanks.




11

—

—

—

—



—

—

—

—

—



—

—

—

—

—



—

—

—

—

—




—

—

—

—

—



—

—

308

—

—